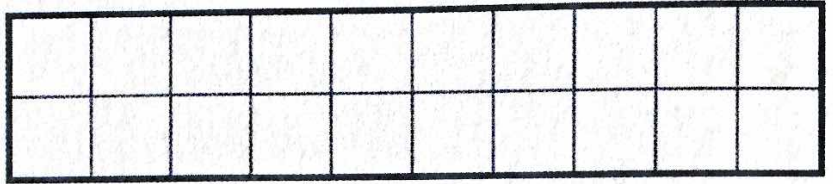



Area and Perimeter

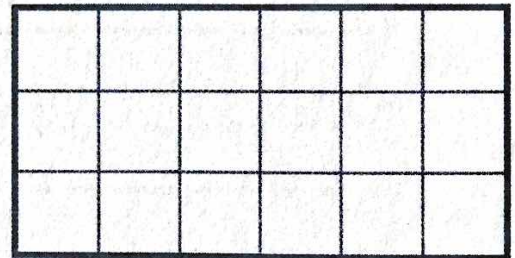
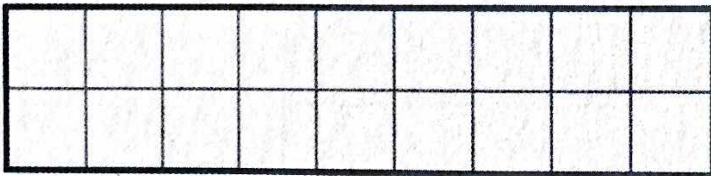
- 1 Each rectangle has an area of 20 square units.
Find the perimeter of each rectangle.



Perimeter: _____ units

Perimeter: _____ units

- 2 Each rectangle has an area of 18 square units.
Find the perimeter of each rectangle.



Perimeter: _____ units

Perimeter: _____ units

- 3 What do you notice about the *perimeter* of shapes that have the same area?

NOTE

Students find the perimeter of rectangles.

MWI Perimeter



NAME _____

DATE _____

(PAGE 2 OF 2)

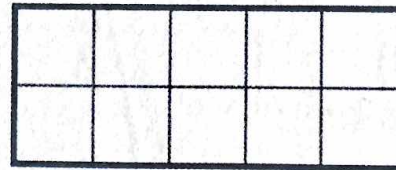

Area and Perimeter

- 4 Each rectangle has a perimeter of 16 units.
Find the area of each rectangle.



Area: _____ square units Area: _____ square units

- 5 Each rectangle has a perimeter of 14 units.
Find the area of each rectangle.



Area: _____ square units Area: _____ square units

- 6 What do you notice about the *area* of shapes that have the same perimeter?

NOTE

Students find the area of rectangles.
MW1 Measuring Area With Square Units