

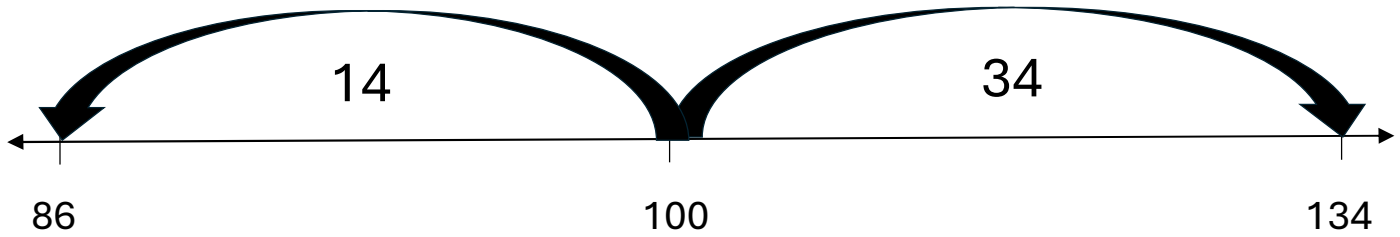
Name _____

Date _____

Subtraction on a Number Line with Landmark Numbers

Show how to solve the problems on the number line.

ex. $134 - 86 = \underline{48}$



Find how far from 100.

Add the distances.

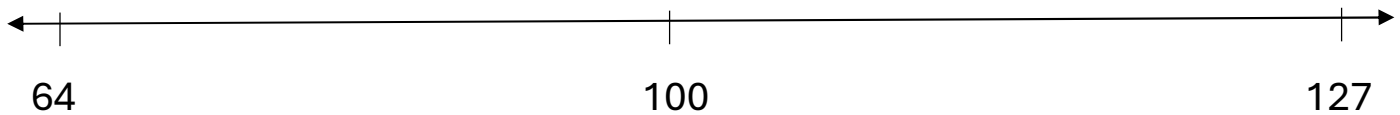
$$14 + 34 =$$

$$10 + 30 = 40$$

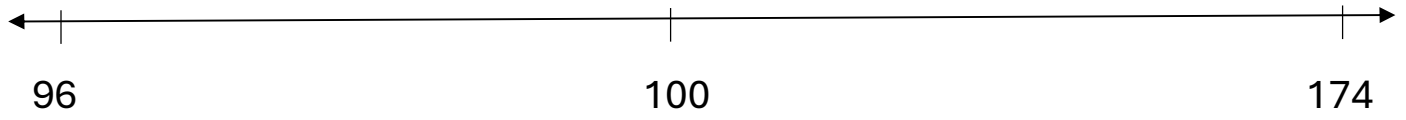
$$4 + 4 = 8$$

$$40 + 8 = \underline{48}$$

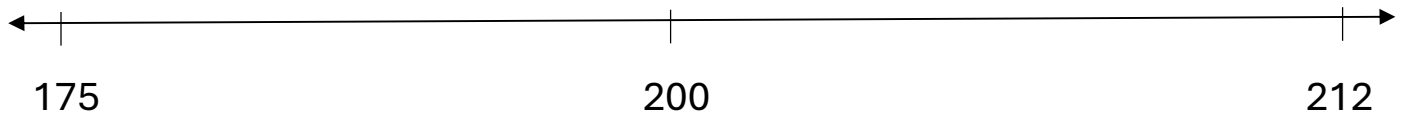
1. $127 - 64 = \underline{\quad}$



2. $174 - 96 = \underline{\hspace{2cm}}$



3. $212 - 175 = \underline{\hspace{2cm}}$



4. $241 - 81 = \underline{\hspace{2cm}}$

