

Problem Set #5
ECE 2025 Spring 2001

(1)

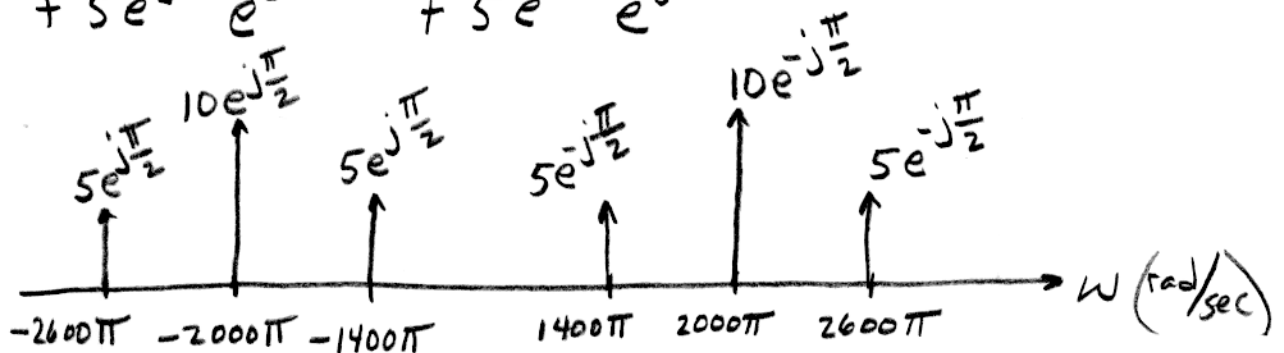
Problem 5.1

$$a) \quad X(t) = 20 \cos(2000\pi t - \pi/2) + 20 \cos(2000\pi t - \pi/2) \cos(600\pi t)$$

$$X(t) = 20 \cos(2000\pi t - \pi/2) + 10 \cos(1400\pi t - \pi/2) + 10 \cos(2600\pi t - \pi/2)$$

$$\text{Using } \cos(\omega_1 t + \phi_1) \cos(\omega_2 t + \phi_2) = \frac{1}{2} \cos((\omega_1 + \omega_2)t + \phi_1 + \phi_2) + \frac{1}{2} \cos((\omega_1 - \omega_2)t + (\phi_1 - \phi_2))$$

$$X(t) = 10 e^{-j\pi/2} e^{j2000\pi t} + 10 e^{j\pi/2} e^{-j2000\pi t} + 5 e^{-j\pi/2} e^{j1400\pi t} + 5 e^{j\pi/2} e^{-j1400\pi t} + 5 e^{-j\pi/2} e^{j2600\pi t} + 5 e^{j\pi/2} e^{-j2600\pi t}$$



$$\text{gcd}(1400\pi, 2000\pi, 2600\pi) = 200\pi \text{ rad/s}$$

$$\Rightarrow \text{Fundamental Period} = 2\pi/200\pi = \frac{1}{100} \text{ secs.}$$

$X(t)$ is PERIODIC

b) Minimum Sampling Rate, f_s , must be twice the highest frequency found within the $X(t)$ signal.
Max. frequency of $X(t)$ is 2600π

$$\omega_{\text{MAX}} = 2600\pi \Rightarrow f_{\text{MAX}} = 1300 \text{ Hz} \Rightarrow f_s = 2f_{\text{MAX}} = 2600 \text{ Hz}$$

Problem 5.1 (cont.)

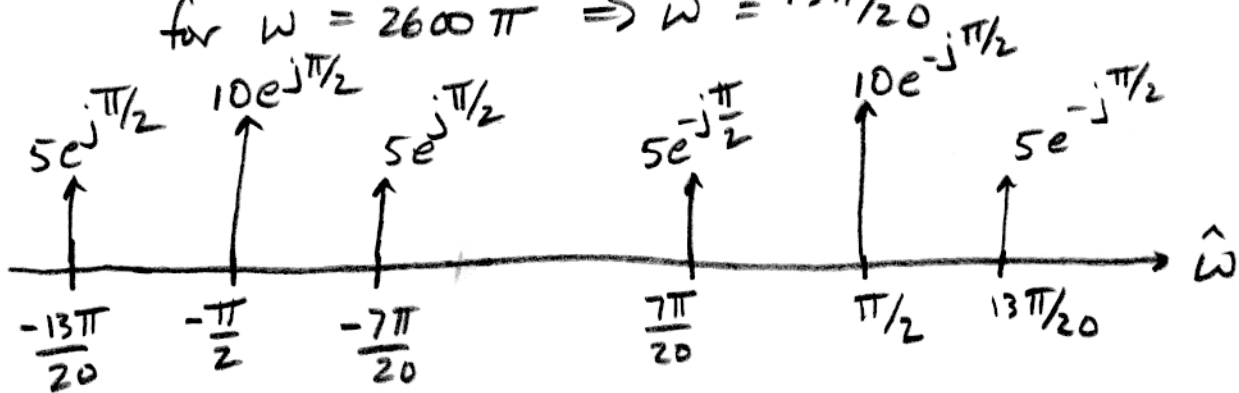
c) Spectrum for $X[n]$ when $f_s = 4000$ Hz

$$\hat{\omega} = 2\pi \frac{f}{f_s} = \frac{2\pi f}{4000} = \frac{\omega}{4000}$$

for $\omega = 1400\pi \Rightarrow \hat{\omega} = 7\pi/20$

for $\omega = 2000\pi \Rightarrow \hat{\omega} = \pi/2$

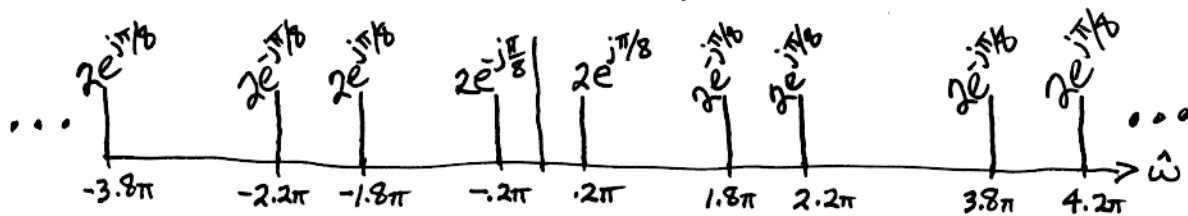
for $\omega = 2600\pi \Rightarrow \hat{\omega} = 13\pi/20$



Prob 5.2

(a) $x[n] = 4 \cos(0.2\pi n + \pi/8) \Rightarrow \hat{\omega} = 0.2\pi$

Draw the discrete-time spectrum with all of its aliases. In other words, add $2\pi k$ to $\hat{\omega}$.



Each $\hat{\omega}$ can be mapped back to a cont-time freq, ω .

The components at $\hat{\omega} = \pm 0.2\pi$:

$$\omega = \hat{\omega} f_s = (0.2\pi)(8000) = 1600\pi \text{ rad/sec}$$

or, 800 Hz.

$$x_1[n] = 4 \cos(0.2\pi n + \pi/8)$$

→ $x_1(t) = 4 \cos(1600\pi t + \pi/8)$

The components at $\hat{\omega} = \pm 1.8\pi$

$$\omega = \hat{\omega} f_s = (1.8\pi)(8000) = 14,400\pi \text{ rad/sec}$$

or, 7200 Hz

$$x_2[n] = 4 \cos(0.2\pi n + \pi/8)$$

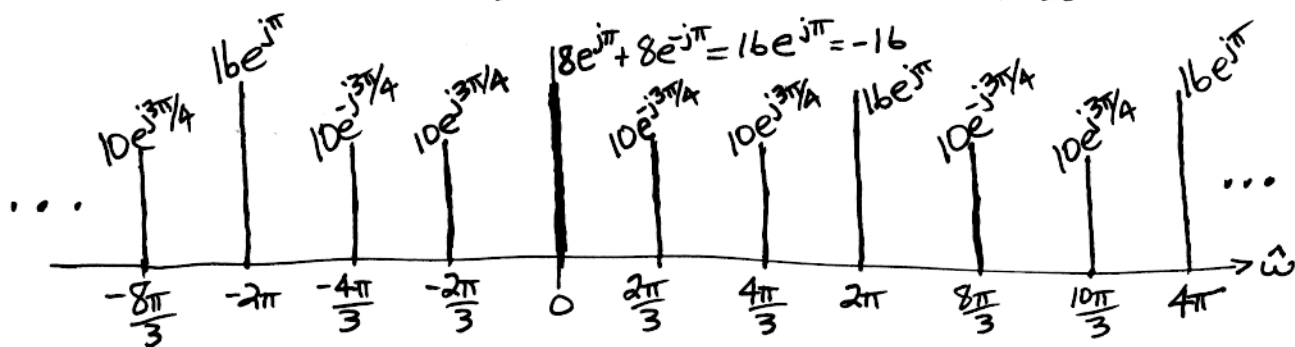
$$= 4 \cos(1.8\pi n - \pi/8)$$

These are the same signal

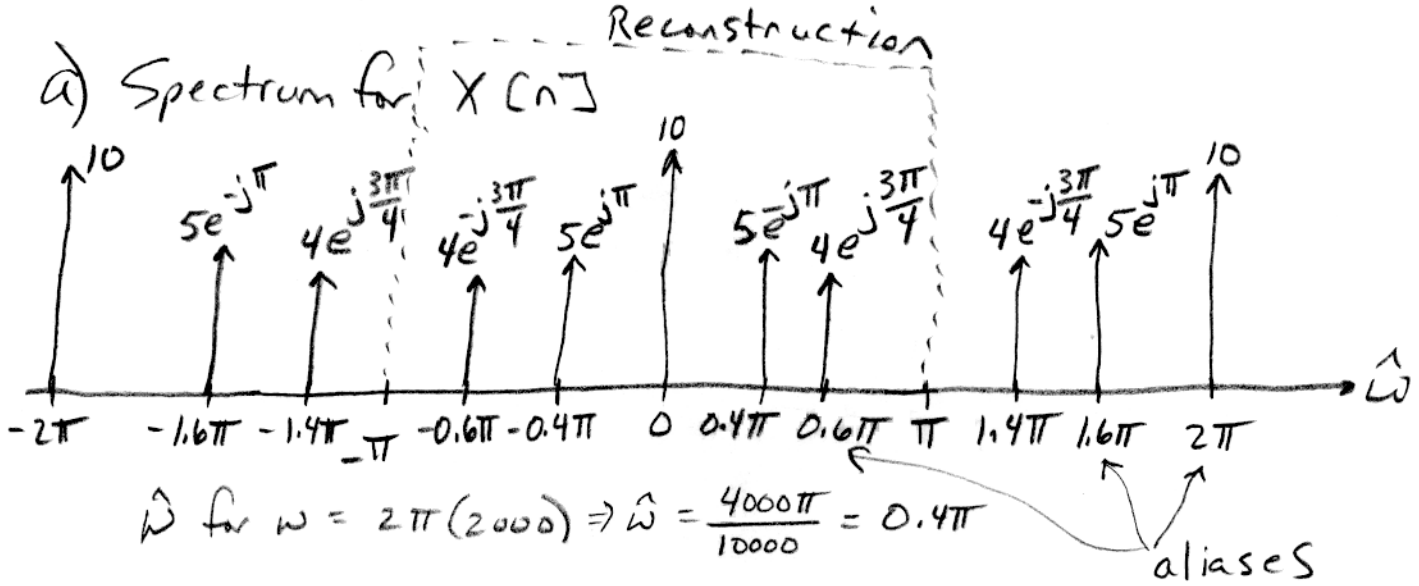
→ $x_2(t) = 4 \cos(14,400\pi t - \pi/8)$

(b) $f_{\max} = 150 \text{ Hz} \Rightarrow f_s \geq 2 f_{\max} = 300 \text{ samples/sec}$

(c) $\hat{\omega} = \omega / f_s \Rightarrow f = 50 \text{ Hz}$ becomes $\hat{\omega} = 2\pi(50)/150 = 2\pi/3$
 $f = 150 \text{ Hz}$ becomes $\hat{\omega} = 2\pi(150)/150 = 2\pi$
BUT $\hat{\omega} = 2\pi$ is the same as $\hat{\omega} = 0$



Problem 5.3



b) If $f_s = 10,000$ Hz.

Reconstruct signal from freq. components between $-\pi \rightarrow \pi$ on the $\hat{\omega}$ scale. Therefore, frequency components are:

$$\hat{\omega} = 0.4\pi \Rightarrow f = \frac{0.4\pi}{2\pi} f_s = 2,000 \text{ Hz}$$

$$\hat{\omega} = 0.6\pi \Rightarrow f = 3,000 \text{ Hz}$$

c) If $f_s = 20,000$ Hz, then

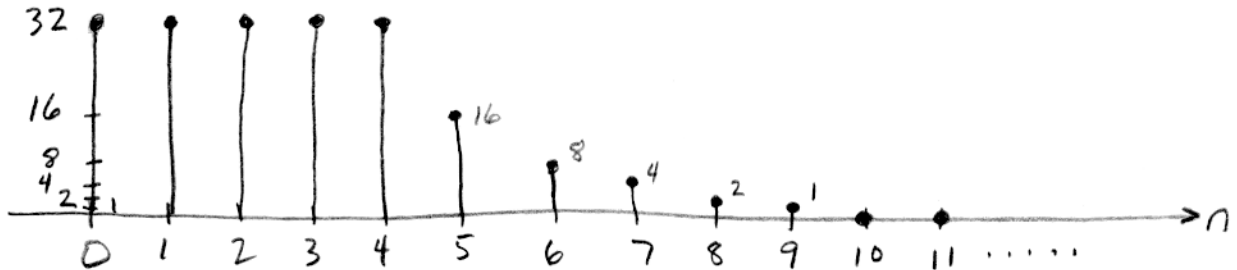
$$\text{For } \hat{\omega} = 0.4\pi \Rightarrow f = 4,000 \text{ Hz}$$

$$\text{For } \hat{\omega} = 0.6\pi \Rightarrow f = 6,000 \text{ Hz}$$

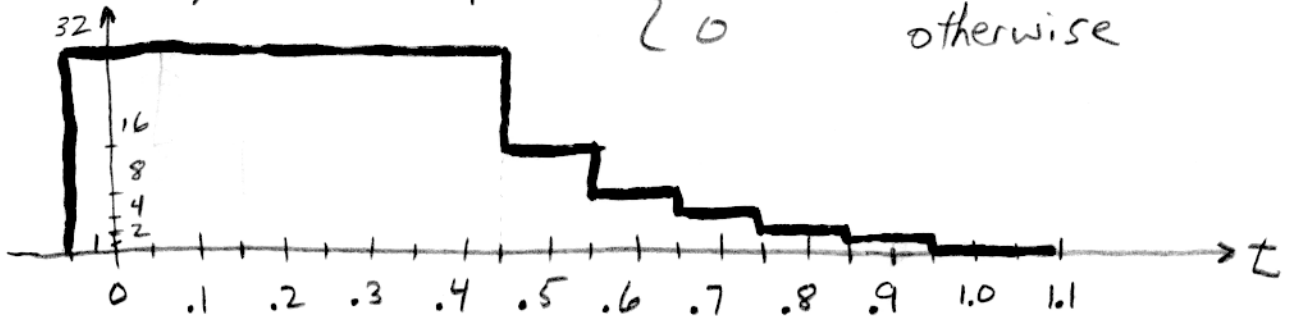
Problem 5.4

(5)

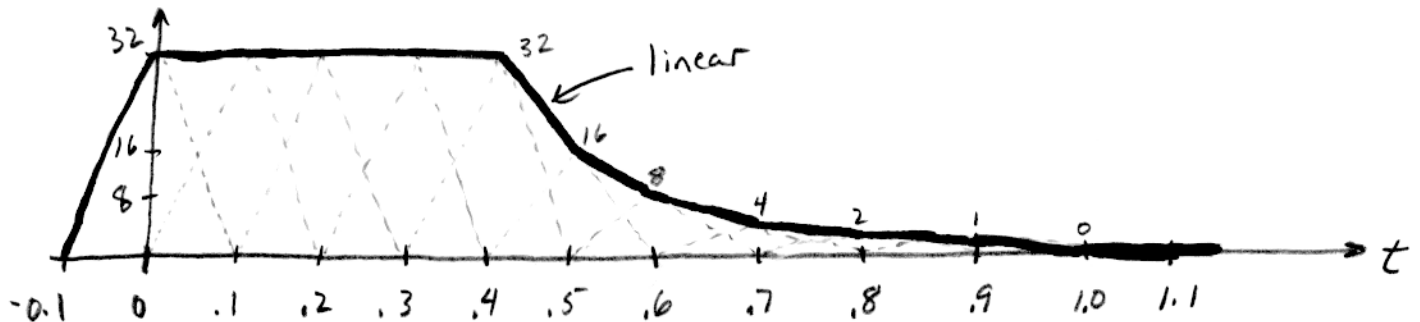
a) Plot $y[n]$ vs n



b) Plot $y(t)$ for $p(t) = \begin{cases} 1 & -0.05 \leq t \leq 0.05 \\ 0 & \text{otherwise} \end{cases}$



c) Plot $y(t)$ for $p(t) = \begin{cases} 1 - 10|t| & -0.1 \leq t \leq 0.1 \\ 0 & \text{otherwise} \end{cases}$



Problem 5.5

(a) $15 \text{ revolutions/sec} = (2\pi \text{ rad/rev})(15 \text{ rev/s}) = 30\pi \text{ rad/sec}$

clockwise $\Rightarrow \omega = -30\pi \text{ rad/s}$

Rotating phasor position = $r e^{j\varphi} e^{-j30\pi t}$

r = length

φ = initial phase

(b) n flashes per second

stand still $\Rightarrow \hat{\omega} = 0$ or $2\pi l$ $\leftarrow l = \text{integer}$

$$\hat{\omega} = \omega / f_s \Rightarrow 2\pi l = \frac{-30\pi}{n}$$

$$\therefore n = \frac{-30\pi}{2\pi l} = \frac{-15}{l} \leftarrow \text{choose } l \text{ so that } n = \text{integer}$$

$$l = -1, -3, -5, -15 \Rightarrow n = 15, 5, 3, 1$$

possible flash rates 15 flash/s, 5 fl/s, 3 fl/s, 1 fl/sec

(c) Flashing period = 100 msec $\Rightarrow f_s = 1/0.1 = 10 \text{ flash/s}$

Use rotating phasor from part (a) and replace "t" with " n/f_s ".

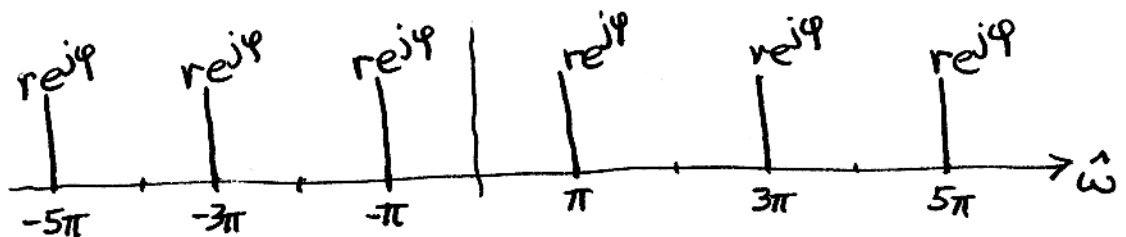
$$r e^{j\varphi} e^{-j30\pi n/10} = r e^{j\varphi} e^{-j3\pi n} = r e^{j\varphi} e^{-j3\pi n} e^{j2\pi l n} \\ = r e^{j\varphi} e^{j\pi(2l-3)n}$$

If $l=2$, the rotating

part of the answer is $e^{j\pi n}$,

so the dot move by π rads each flash. There are 10 flashes/sec, so the dot will make 5 revs/sec.

(d)

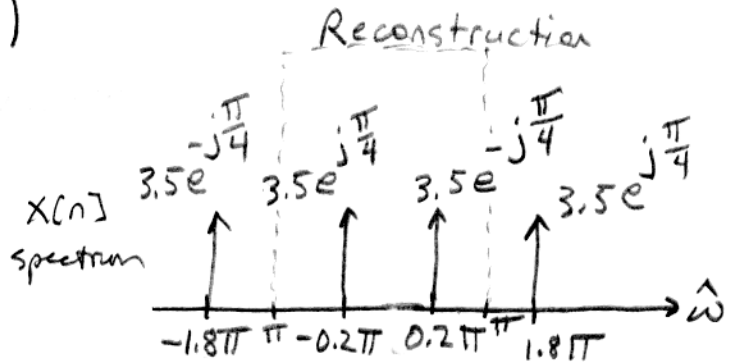
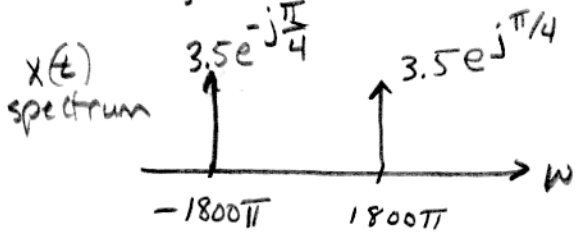


Problem 5.6

(7)

a) $x(t) = 7 \cos(1800\pi t + \frac{\pi}{4})$

$f_s = 1000 \text{ Hz}$



Reconstruction

Reconstruct using signals in the range $-\pi \rightarrow \pi$ (this is the spectrum for $y[n]$)

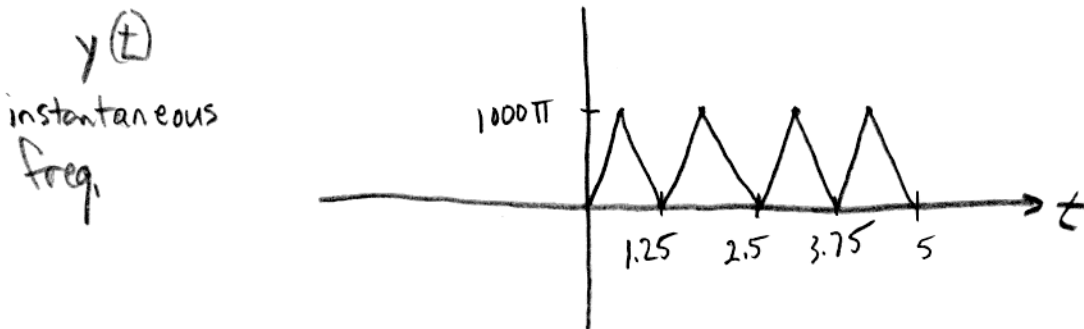
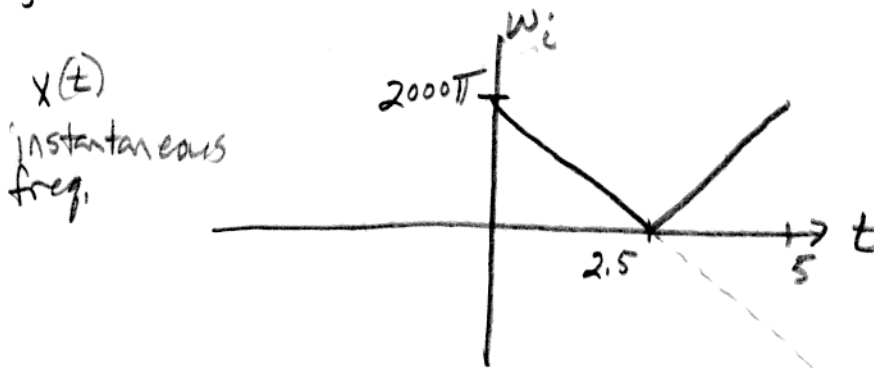
$y[n] = 7 \cos(0.2\pi n - \frac{\pi}{4})$

$\Rightarrow y(t) = 7 \cos(200\pi t - \frac{\pi}{4})$

b) $x(t) = \cos(2000\pi t - 400\pi t^2)$ for $0 \leq t \leq 5 \text{ sec}$

$f_s = 1000 \text{ Hz}$ $\omega_i(t) = 2000\pi - 800\pi t$ At $t=0 \Rightarrow \omega_c = 2000\pi$

$t = T_s \Rightarrow \omega_c =$



Note: Same as Problem 5.2, Fall 2000