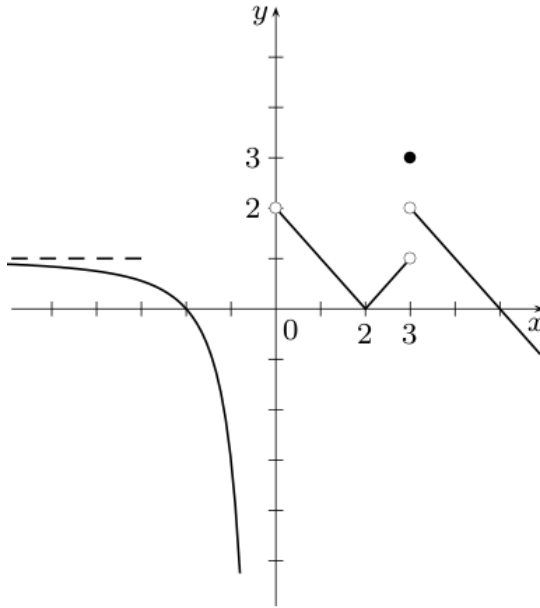


## 201-103-RE - Calculus 1

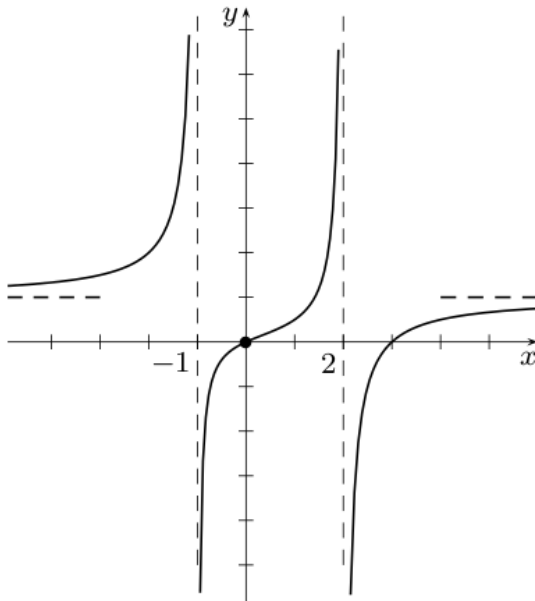
### WORKSHEET: LIMITS

1. Use the graph of the function  $f(x)$  to answer each question.  
Use  $\infty$ ,  $-\infty$  or  $DNE$  where appropriate.



- (a)  $f(0) =$
- (b)  $f(2) =$
- (c)  $f(3) =$
- (d)  $\lim_{x \rightarrow 0^-} f(x) =$
- (e)  $\lim_{x \rightarrow 0} f(x) =$
- (f)  $\lim_{x \rightarrow 3^+} f(x) =$
- (g)  $\lim_{x \rightarrow 3} f(x) =$
- (h)  $\lim_{x \rightarrow -\infty} f(x) =$

2. Use the graph of the function  $f(x)$  to answer each question.  
Use  $\infty$ ,  $-\infty$  or  $DNE$  where appropriate.



- (a)  $f(0) =$
- (b)  $f(2) =$
- (c)  $f(3) =$
- (d)  $\lim_{x \rightarrow -1} f(x) =$
- (e)  $\lim_{x \rightarrow 0} f(x) =$
- (f)  $\lim_{x \rightarrow 2^+} f(x) =$
- (g)  $\lim_{x \rightarrow \infty} f(x) =$

3. Evaluate each limit using algebraic techniques.  
Use  $\infty$ ,  $-\infty$  or *DNE* where appropriate.

$$(a) \lim_{x \rightarrow 0} \frac{x^2 - 25}{x^2 - 4x - 5}$$

$$(b) \lim_{x \rightarrow 5} \frac{x^2 - 25}{x^2 - 4x - 5}$$

$$(c) \lim_{x \rightarrow 1} \frac{7x^2 - 4x - 3}{3x^2 - 4x + 1}$$

$$(d) \lim_{x \rightarrow -2} \frac{x^4 + 5x^3 + 6x^2}{x^2(x+1) - 4(x+1)}$$

$$(e) \lim_{x \rightarrow -3} |x+1| + \frac{3}{x}$$

$$(f) \lim_{x \rightarrow 3} \frac{\sqrt{x+1} - 2}{x^2 - 9}$$

$$(g) \lim_{x \rightarrow 3} \frac{\sqrt{x^2+7} - 3}{x+3}$$

$$(h) \lim_{x \rightarrow 2} \frac{x^2 + 2x - 8}{\sqrt{x^2+5} - (x+1)}$$

$$(i) \lim_{y \rightarrow 5} \left( \frac{2y^2 + 2y + 4}{6y - 3} \right)^{1/3}$$

$$(j) \lim_{x \rightarrow 0} \sqrt[4]{2 \cos(x) - 5}$$

$$(k) \lim_{x \rightarrow 0} \frac{\frac{1}{3+x} - \frac{1}{3-x}}{x}$$

$$(l) \lim_{x \rightarrow -6} \frac{\frac{2x+8}{x^2-12} - \frac{1}{x}}{x+6}$$

$$(m) \lim_{x \rightarrow \infty} \sqrt{x^2 - 2} - \sqrt{x^2 + 1}$$

$$(n) \lim_{x \rightarrow -\infty} \sqrt{x-2} - \sqrt{x}$$

$$(o) \lim_{x \rightarrow 7} \sqrt[6]{2x-14}$$

$$(p) \lim_{x \rightarrow 1^-} \sqrt{3-3x}$$

$$(q) \lim_{x \rightarrow \infty} \frac{x^4 - 10}{4x^3 + x}$$

$$(r) \lim_{x \rightarrow -\infty} \sqrt[3]{\frac{x-3}{5-x}}$$

$$(s) \lim_{x \rightarrow \infty} \frac{3x^3 + x^2 - 2}{x^2 + x - 2x^3 + 1}$$

$$(t) \lim_{x \rightarrow \infty} \frac{x+5}{2x^2+1}$$

$$(u) \lim_{x \rightarrow -\infty} \cos \left( \frac{x^5 + 1}{x^6 + x^5 + 100} \right)$$

$$(v) \lim_{x \rightarrow 2} \frac{2x}{x^2 - 4}$$

$$(w) \lim_{x \rightarrow -1} \frac{3x}{x^2 + 2x + 1}$$

$$(x) \lim_{x \rightarrow -1} \frac{x^2 - 25}{x^2 - 4x - 5}$$

$$(y) \lim_{x \rightarrow 3} \frac{\sqrt{x^2 - 5} + 2}{x - 3}$$

$$(z) \lim_{x \rightarrow 0} \frac{2^x + \sin(x)}{x^4}$$

$$(A) \lim_{x \rightarrow 1^-} \frac{1}{x-1} + e^{x^2}$$

$$(B) \lim_{x \rightarrow \infty} 2x^2 - 3x$$

$$(C) \lim_{x \rightarrow 0} \frac{\sqrt{x+2} - \sqrt{2-x}}{x}$$

$$(D) \lim_{x \rightarrow 0^+} \frac{e^x}{1 + \ln(x)}$$

$$(E) \lim_{x \rightarrow \infty} \sqrt{x^2+1} - 2x$$

$$(F) \lim_{x \rightarrow 1} \frac{\sqrt[3]{x} - 1}{\sqrt{x} - 1}$$

4. Find the following limits involving absolute values.

$$(a) \lim_{x \rightarrow 1} \frac{x^2 - 1}{|x - 1|}$$

$$(b) \lim_{x \rightarrow -2} \frac{1}{|x + 2|} + x^2$$

$$(c) \lim_{x \rightarrow 3^-} \frac{x^2|x - 3|}{x - 3}$$

5. Find the value of the parameter  $k$  to make the following limit exist and be finite. What is then the value of the limit?

$$\lim_{x \rightarrow 5} \frac{x^2 + kx - 20}{x - 5}$$

6. Answer the following questions for the piecewise defined function  $f(x)$  described on the right hand side.

$$(a) f(1) =$$

$$(b) \lim_{x \rightarrow 0} f(x) =$$

$$(c) \lim_{x \rightarrow 1} f(x) =$$

$$f(x) = \begin{cases} \sin(\pi x) & \text{for } x < 1, \\ 2x^2 & \text{for } x > 1. \end{cases}$$

7. Answer the following questions for the piecewise defined function  $f(t)$  described on the right hand side.

$$(a) f(-3/2) =$$

$$(b) f(2) =$$

$$(c) f(3/2) =$$

$$(d) \lim_{t \rightarrow -2} f(t) =$$

$$(e) \lim_{t \rightarrow -1^+} f(t) =$$

$$(f) \lim_{t \rightarrow 2} f(t) =$$

$$(g) \lim_{t \rightarrow 0} f(t) =$$

$$f(t) = \begin{cases} t^2 & \text{for } t < -2 \\ \frac{t + 6}{t^2 - t} & \text{for } -1 < t < 2 \\ 3t - 2 & \text{for } t \geq 2 \end{cases}$$

**ANSWERS:**

1. (a) DNE (b) 0 (c) 3 (d)  $-\infty$  (e) DNE (f) 2 (g) DNE (h) 1

2. (a) 0 (b) DNE (c) 0 (d) DNE (e) 0 (f)  $-\infty$  (g) 1

3.

(a) 5	(l) $\frac{1}{36}$	(w) $-\infty$
(b) $\frac{5}{3}$	(m) 0	(x) DNE
(c) 5	(n) DNE	(y) DNE
(d) 1	(o) DNE	(z) $\infty$
(e) 1	(p) 0	(A) $-\infty$
(f) $\frac{1}{24}$	(q) $\infty$	(B) $\infty$
(g) $\frac{1}{6}$	(r) $-1$	(C) $\frac{1}{\sqrt{2}}$
(h) $-18$	(s) $-\frac{3}{2}$	(D) 0
(i) $\frac{4}{3}$	(t) 0	(E) $-\infty$
(j) DNE	(u) 1	(F) $\frac{2}{3}$
(k) $-\frac{2}{9}$	(v) DNE	

4. (a) DNE (b)  $\infty$  (c)  $-9$

5.  $k = -1$ , limit is then equal to 9

6. (a) DNE (b) 0 (c) DNE

7. (a) DNE (b) 4 (c) 10 (d) DNE (e)  $\frac{5}{2}$  (f) 4 (g) DNE

8. (a) 0 (b) 0 (c)  $\frac{5}{3}$

Name

Pre-Calculus Rational functions worksheet

For each of the rational functions find: a. domain b. holes c. vertical asymptotes d. horizontal asymptotes e. y-intercept f. x-intercepts

1.  $f(x) = \frac{x^2 + x - 2}{x^2 - x - 6}$

2.  $f(x) = \frac{2x^2}{x^2 - 1}$

3.  $f(x) = \frac{3}{x - 2}$

4.  $f(x) = \frac{2x - 1}{x}$

5.  $f(x) = \frac{x^2 + x - 12}{x^2 - 9}$

6.  $f(x) = \frac{x^2 - 4}{x + 3}$

$$7. f(x) = \frac{x^2 - x}{x+1}$$

$$8. f(x) = \frac{x^2 - x - 2}{x-1}$$

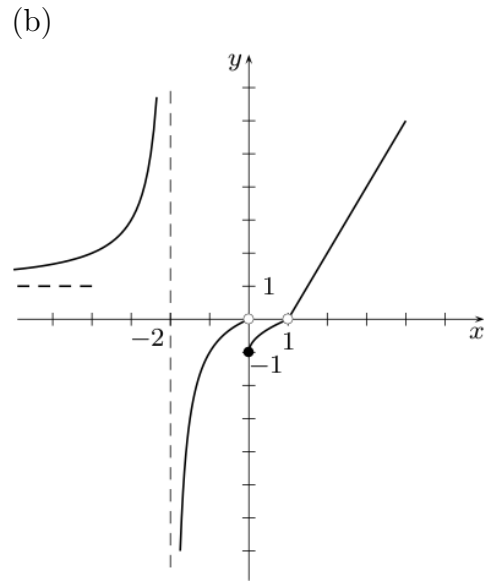
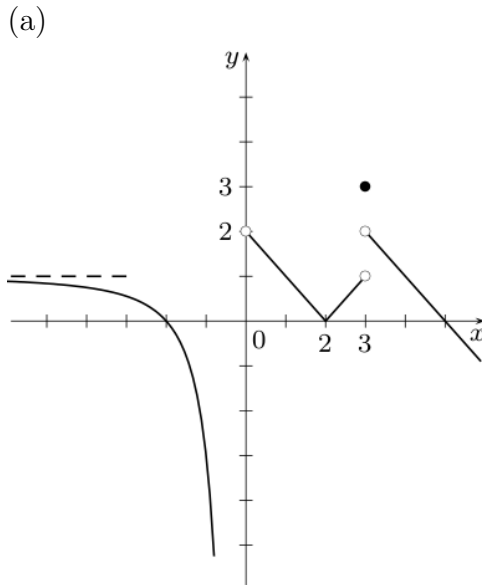
$$9. f(x) = \frac{x+1}{x^2 + 3x + 2}$$

$$10. f(x) = \frac{x^2 - 9}{x^2 - 2x - 3}$$

## 201-103-RE - Calculus 1

### WORKSHEET: CONTINUITY

1. For each graph, determine where the function is **discontinuous**. Justify for each point by: (i) saying which condition fails in the definition of continuity, and (ii) by mentioning which type of discontinuity it is.



2. For each function, determine the interval(s) of continuity.

(a)  $f(x) = x^2 + e^x$

(c)  $f(x) = \sqrt[4]{5-x}$

(b)  $f(x) = \frac{3x+1}{2x^2-3x-2}$

(d)\*  $f(x) = \frac{2}{4-x^2} + \frac{1}{\sqrt{x^2-x-12}}$

3. For each piecewise defined function, determine where  $f(x)$  is continuous (or where it is discontinuous). Justify your answer in detail.

(a)  $f(x) = \begin{cases} 2^x - 3x^2 & \text{for } x \leq 1 \\ \log_{10}(x) + x & \text{for } x > 1 \end{cases}$

(b)  $f(x) = \begin{cases} \frac{2x}{3-x} & \text{for } x \leq 0 \\ x^2 - 3x & \text{for } 0 < x < 2 \\ \frac{x^2-8}{x} & \text{for } x > 2 \end{cases}$

4. Find all the value(s) of the parameter  $c$  (if possible), to make the given function continuous everywhere.

(a)  $f(x) = \begin{cases} c \cdot 3^x - x^2 + 2c & \text{for } x \leq 0 \\ 2x^5 + c(x+1) + 16 & \text{for } x > 0 \end{cases}$

$$(b) \quad f(x) = \begin{cases} 2(cx)^3 + x - 1 & \text{for } x \leq 1 \\ 2cx + (x - 1)^2 & \text{for } x > 1 \end{cases}$$

$$(c) \quad f(x) = \begin{cases} 3x + c & \text{for } x < -1 \\ x^2 - c & \text{for } -1 \leq x \leq 2 \\ 3 & \text{for } x > 2 \end{cases}$$

- 5.\* Consider the function  $f(x) = \lfloor x \rfloor$ , the greatest integer function (also called the floor function or the step function). Where is this function discontinuous?
- 6.\* Find an example of a function such that the limit exists at every  $x$ , but that has an infinite number of discontinuities. (You can describe the function and/or write a formula down and/or draw a graph.)

**PARTIAL ANSWERS:**

1. (a)  $x = 0, 3$  (b)  $x = -2, 0, 1$
2. (a)  $\mathbb{R}$  (b)  $\mathbb{R} \setminus \{-1/2, 2\}$  (c)  $(-\infty, 5]$  (d)  $(-3, 2) \cup (-2, 2) \cup (2, 4)$
3. (a) discontinuous only at  $x = 1$  (b) discontinuous only at  $x = 2$
4. (a)  $c = 8$  (b)  $c = -1, 0, 1$  (c) no solution possible
5. discontinuous at every integer,  $x = \dots, -3, -2, -1, 0, 1, 2, 3, \dots$
6. many answers are possible, show me your solution!



## 201-103-RE - Calculus 1

### WORKSHEET: DEFINITION OF THE DERIVATIVE

1. For each function given below, calculate the **derivative at a point**  $f'(a)$  using the limit definition.

(a)  $f(x) = 2x^2 - 3x$        $f'(0) = ?$

(b)  $f(x) = \sqrt{2x+1}$        $f'(4) = ?$

(c)  $f(x) = \frac{1}{x-2}$        $f'(3) = ?$

2. For each function  $f(x)$  given below, find the **general derivative**  $f'(x)$  as a new function by using the limit definition.

(a)  $f(x) = \sqrt{x-4}$        $f'(x) = ?$

(b)  $f(x) = -x^3$        $f'(x) = ?$

(c)  $f(x) = \frac{x}{x+1}$        $f'(x) = ?$

(d)  $f(x) = \frac{1}{\sqrt{x}}$        $f'(x) = ?$

3. For each function  $f(x)$  given below, find the **equation of the tangent line** at the indicated point.

(a)  $f(x) = x - x^2$       at  $(2, -2)$

(b)  $f(x) = 1 - 3x^2$       at  $(0, 1)$

(c)  $f(x) = \frac{1}{2x}$       at  $x = 1$

(d)  $f(x) = x + \sqrt{x}$       at  $x = 1$

### ANSWERS:

1. (a)  $f'(0) = -3$     (b)  $f'(4) = 1/3$     (c)  $f'(3) = -1$

2. (a)  $f'(x) = \frac{1}{2\sqrt{x-4}}$     (b)  $f'(x) = -3x^2$     (c)  $f'(x) = \frac{1}{(x+1)^2}$     (d)  $f'(x) = \frac{-1}{2x^{3/2}}$

3. (a)  $y = -3x + 4$     (b)  $y = 1$     (c)  $y = -\frac{1}{2}x + 1$     (d)  $y = \frac{3}{2}x + \frac{1}{2}$

**Derivative Practice Worksheet**

Name: \_\_\_\_\_

*Solve the derivatives for using basic differentiation.*

**1.**  $y = 3$

**2.**  $g(x) = x^2 + 4$

**3.**  $h(t) = -2t^2 + 3t - 6$

**4.**  $s(t) = t^3 - 2t + 4$

**5.**  $f(x) = \frac{x^2 - \frac{1}{2}x^3}{x^4}$

**6.**  $y = 5 + x$

**7.**  $g(x) = \frac{1}{x} - 3x^{\frac{3}{2}} + 5x^{\frac{4}{7}}$

**8.**  $f(x) = x^2 - \frac{1}{2}\sqrt{x}$

**9.**  $y = 5 + \sqrt[3]{x^2}$

**10.**  $g(x) = \frac{1}{x} - 3x^2$

**11.**  $h(x) = \frac{1}{3x^3}$

**12.**  $y = \frac{\sqrt{x}}{x}$

**13.**  $f(x) = x^3 - 3x - 2x^{-4}$

14.  $y = \frac{3x-2}{2x-3}$

15.  $f(x) = \frac{3-2x-x^2}{x^2-1}$

16.  $g(x) = (x^2 - 2x + 1)(x^3 - 1)$

17.  $y = 3x^2(2x^2 + 5x)$

18.  $f(x) = \frac{5x-2}{x^2+1}$

19.  $y = x^{\frac{9}{4}}$

20.  $f(x) = \frac{x+1}{\sqrt{x}}$

21.  $y = -\frac{4}{x^9}$

22.  $y = (4x^2 + 3x)(3x^3 - 2)$

23.  $y = \frac{2x^2 - x}{3x + 2}$

24.  $y = \frac{x^2 + 2x + 1}{3x}$

## Worksheet # 12: Higher Derivatives and Trigonometric Functions

1. Calculate the indicated derivative:

- (a)  $f^{(4)}(1)$ ,  $f(x) = x^4$   
(b)  $g^{(3)}(5)$ ,  $g(x) = 2x^2 - x + 4$   
(c)  $h^{(3)}(t)$ ,  $h(t) = 4e^t - t^3$   
(d)  $s^{(2)}(w)$ ,  $s(w) = \sqrt{w}e^w$

2. Calculate the first three derivatives of  $f(x) = xe^x$  and use these to guess a general formula for  $f^{(n)}(x)$ , the  $n$ -th derivative of  $f$ .

3. Let  $f(t) = t + 2\cos(t)$ .

- (a) Find all values of  $t$  where the tangent line to  $f$  at the point  $(t, f(t))$  is horizontal.  
(b) What are the largest and smallest values for the slope of a tangent line to the graph of  $f$ ?

4. Differentiate each of the following functions:

- (a)  $f(t) = \cos(t)$   
(b)  $g(u) = \frac{1}{\cos(u)}$   
(c)  $r(\theta) = \theta^3 \sin(\theta)$   
(d)  $s(t) = \tan(t) + \csc(t)$   
(e)  $h(x) = \sin(x) \csc(x)$   
(f)  $f(x) = x^2 \sin(x)$   
(g)  $g(x) = \sec(x) + \cot(x)$

5. Calculate the first five derivatives of  $f(x) = \sin(x)$ . Then determine  $f^{(8)}$  and  $f^{(37)}$

6. Calculate the first 5 derivatives of  $f(x) = 1/x$ . Can you guess a formula for the  $n$ th derivative,  $f^{(n)}$ ?

7. A particle's distance from the origin (in meters) along the  $x$ -axis is modeled by  $p(t) = 2\sin(t) - \cos(t)$ , where  $t$  is measured in seconds.

- (a) Determine the particle's speed (speed is defined as the absolute value of velocity) at  $\pi$  seconds.  
(b) Is the particle moving towards or away from the origin at  $\pi$  seconds? Explain.  
(c) Now, find the velocity of the particle at time  $t = \frac{3\pi}{2}$ . Is the particle moving toward the origin or away from the origin?  
(d) Is the particle speeding up at  $\frac{\pi}{2}$  seconds?

8. Find an equation of the tangent line at the point specified:

- (a)  $y = x^3 + \cos(x)$ ,  $x = 0$   
(b)  $y = \csc(x) - \cot(x)$ ,  $x = \frac{\pi}{4}$   
(c)  $y = e^\theta \sec(\theta)$ ,  $\theta = \frac{\pi}{4}$

9. Comprehension check for derivatives of trigonometric functions:

- (a) True or False: If  $f'(\theta) = -\sin(\theta)$ , then  $f(\theta) = \cos(\theta)$ .  
(b) True or False: If  $\theta$  is one of the non-right angles in a right triangle and  $\sin(\theta) = \frac{2}{3}$ , then the hypotenuse of the triangle must have length 3.

## Math Excel Supplemental Problems #12

1. Use the Product Rule twice to find a formula for  $(fg)''$  in terms of  $f$  and  $g$  as well as their first and second derivatives.
2. Calculate the first and second derivatives of the following functions:
  - (a)  $f(x) = x \sin x$
  - (b)  $f(x) = \frac{e^x}{\cos x}$
  - (c)  $f(x) = \frac{\csc x}{x}$
  - (d)  $f(x) = \tan x$
3. Calculate the first five derivatives of  $f(x) = \cos x$ , then determine  $f^{(8)}$  and  $f^{(37)}$

## Chain Rule Practice

© 2013 Kuta Software LLC. All rights reserved.

**Differentiate each function with respect to  $x$ .**

1)  $y = (5x^4 + 1)^2$

2)  $y = \sqrt[5]{-x^3 - 4}$

3)  $f(x) = (4x^5 - 1)\sqrt[3]{x + 1}$

4)  $y = \sqrt{-x^4 - 1}(-x - 2)$

5)  $y = (3x - 1)(-3x^2 - 4)^{-3}$

6)  $f(x) = \left(\frac{5x^5 - 3}{-3x^3 + 1}\right)^3$

$$7) f(x) = \left( \frac{x^5 + 4}{x^2 - 5} \right)^{\frac{1}{5}}$$

$$8) f(x) = \frac{\sqrt[5]{x^2 - 3}}{-x - 5}$$

$$9) y = \sec 2x^4$$

$$10) f(x) = (-3x^3 - 1)\csc 5x^4$$

$$11) f(x) = \cos 3x^2 \cdot \sqrt[3]{5x^3 - 1}$$

$$12) f(x) = \sin 4x^3$$

$$13) f(x) = \frac{4x^4 + 5}{\tan 3x^5}$$

$$14) y = \cot \sqrt[3]{-5x^3 - 2}$$

## Answers to Chain Rule Practice

$$1) \frac{dy}{dx} = 2(5x^4 + 1) \cdot 20x^3 \\ = 40x^3(5x^4 + 1)$$

$$2) \frac{dy}{dx} = \frac{1}{5}(-x^3 - 4)^{-\frac{4}{5}} \cdot -3x^2 \\ = -\frac{3x^2}{5(-x^3 - 4)^{\frac{4}{5}}}$$

$$3) f'(x) = (4x^5 - 1) \cdot \frac{1}{3}(x+1)^{-\frac{2}{3}} + (x+1)^{\frac{1}{3}} \cdot 20x^4 \\ = \frac{64x^5 + 60x^4 - 1}{3(x+1)^{\frac{2}{3}}}$$

$$4) \frac{dy}{dx} = (-x^4 - 1)^{\frac{1}{2}} \cdot -1 + (-x - 2) \cdot \frac{1}{2}(-x^4 - 1)^{-\frac{1}{2}} \cdot -4x^3 \\ = \frac{(x+1)^2(3x^2 - 2x + 1)}{(-x^4 - 1)^{\frac{1}{2}}}$$

$$5) \frac{dy}{dx} = (3x - 1) \cdot -3(-3x^2 - 4)^{-4} \cdot -6x + (-3x^2 - 4)^{-3} \cdot 3 \\ = \frac{3(15x^2 - 6x - 4)}{(-3x^2 - 4)^4}$$

$$6) f'(x) = 3 \cdot \left( \frac{5x^5 - 3}{-3x^3 + 1} \right)^2 \cdot \frac{(-3x^3 + 1) \cdot 25x^4 - (5x^5 - 3) \cdot -9x^2}{(-3x^3 + 1)^2} \\ = \frac{3x^2(5x^5 - 3)^2(-30x^5 + 25x^2 - 27)}{(-3x^3 + 1)^4}$$

$$7) f'(x) = \frac{1}{5} \cdot \left( \frac{x^5 + 4}{x^2 - 5} \right)^{-\frac{4}{5}} \cdot \frac{(x^2 - 5) \cdot 5x^4 - (x^5 + 4) \cdot 2x}{(x^2 - 5)^2} \\ = \frac{x(3x^5 - 25x^3 - 8)}{5(x^5 + 4)^{\frac{4}{5}} \cdot (x^2 - 5)^{\frac{6}{5}}}$$

$$8) f'(x) = \frac{(-x - 5) \cdot \frac{1}{5}(x^2 - 3)^{-\frac{4}{5}} \cdot 2x + (x^2 - 3)^{\frac{1}{5}}}{(-x - 5)^2} \\ = \frac{3x^2 - 15 - 10x}{5(-x - 5)^2 \cdot (x^2 - 3)^{\frac{4}{5}}}$$

$$10) f'(x) = (-3x^3 - 1) \cdot -\csc 5x^4 \cot 5x^4 \cdot 20x^3 + \csc 5x^4 \cdot -9x^2 \\ = x^2 \csc 5x^4 \cdot (60x^4 \cot 5x^4 + 20x \cot 5x^4 - 9)$$

$$9) \frac{dy}{dx} = \sec 2x^4 \cdot \tan 2x^4 \cdot 8x^3 \\ = 8x^3 \sec 2x^4 \cdot \tan 2x^4$$



$$\begin{aligned}
 11) \quad f'(x) &= \cos 3x^2 \cdot \frac{1}{3}(5x^3 - 1)^{-\frac{2}{3}} \cdot 15x^2 + (5x^3 - 1)^{\frac{1}{3}} \cdot -\sin 3x^2 \cdot 6x \\
 &= \frac{x(-30x^3 \sin 3x^2 + 6\sin 3x^2 + 5x\cos 3x^2)}{(5x^3 - 1)^{\frac{2}{3}}}
 \end{aligned}$$

$$\begin{aligned}
 12) \quad f'(x) &= \cos 4x^3 \cdot 12x^2 \\
 &= 12x^2 \cos 4x^3
 \end{aligned}$$

$$\begin{aligned}
 13) \quad f'(x) &= \frac{\tan 3x^5 \cdot 16x^3 - (4x^4 + 5) \cdot \sec^2 3x^5 \cdot 15x^4}{\tan^2 3x^5} \\
 &= \frac{x^3(16\tan 3x^5 - 60x^5 \cdot \sec^2 3x^5 - 75x \cdot \sec^2 3x^5)}{\tan^2 3x^5}
 \end{aligned}$$

$$\begin{aligned}
 14) \quad \frac{dy}{dx} &= -\csc^2(-5x^3 - 2)^{\frac{1}{3}} \cdot \frac{1}{3}(-5x^3 - 2)^{-\frac{2}{3}} \cdot -15x^2 \\
 &= \frac{5x^2 \cdot \csc^2(-5x^3 - 2)^{\frac{1}{3}}}{(-5x^3 - 2)^{\frac{2}{3}}}
 \end{aligned}$$

## Implicit differentiation worksheet for Calculus 1

Determine  $dy/dx$  for each of the following.

(1)  $y = x^2 + xy$

(2)  $x^2y + y = 3$

(3)  $x^{1/4} + y^{1/4} = 2$

(4)  $x^{1/3} + y^{1/3} = 7$

(5)  $\sqrt{x} + \sqrt{y} = 25$

(6)  $x^2 + y^2 = 1.1$

(7)  $x^3 + y^3 = \sqrt{5}$

(8)  $x + \sin(y) = y + 1$

(9)  $y\sqrt{x} + x\sqrt{y} = 16$

(10)  $x^2 + xy - y^3 = xy^2$

(11)  $x^2 + y^2 = \sqrt{7}$

(12)  $x^{2/3} + y^{2/3} = a^{2/3}$  ( $a$  is a constant)

(13)  $x^ay^2 + x^by + x^c = 0$  ( $a, b, c$  constants)

(14)  $\sin(xy) = 2x + 5$

(15)  $x \ln(y) + y^3 = \ln(x)$

(16)  $e^{\cos(y)} = x^3 \sin(y)$

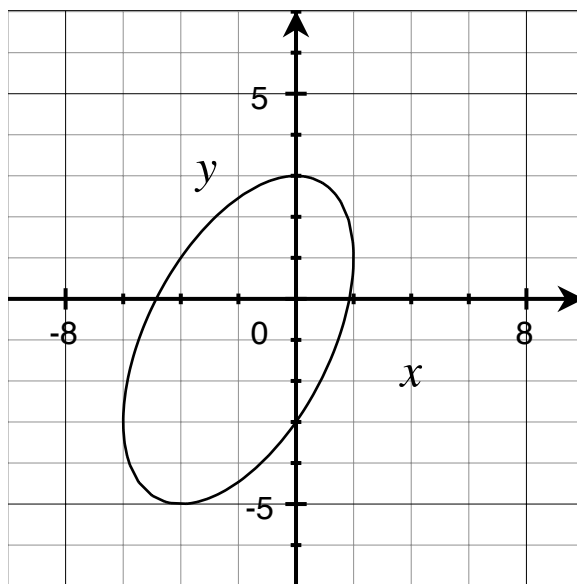
Determine  $d^2y/dx^2$  for each of the following.

(17)  $1 - xy = x - y^2$

(18)  $x - y = (x + y)^2$

(19)  $x^{2/3} + y^{2/3} = 8$

(20)  $\sin(x) - 4 \cos(y) = y$



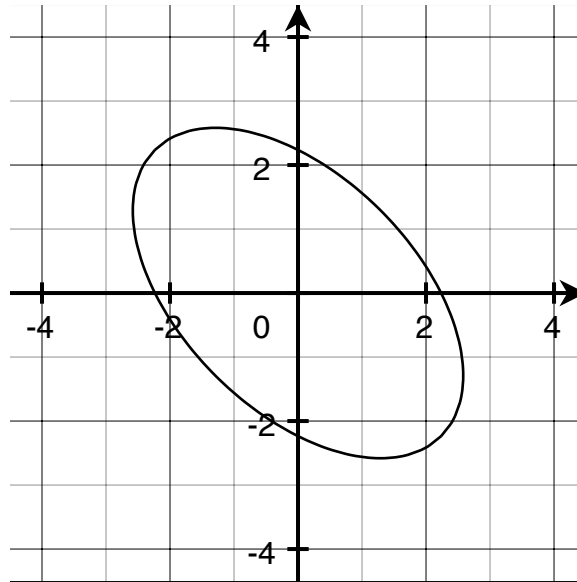
For the curve  $x^2 + y^2 - xy + 3x - 9 = 0$  (above),

(21) Determine  $dy/dx$ .

(22) Where do the horizontal tangent lines occur?

(23) Where do the vertical tangent lines occur ( $dy/dx = \pm\infty$ )?

(24) Determine  $d^2y/dx^2$ .



For the curve  $x^2 + xy + y^2 = 5$  (above),

- (25) Determine  $dy/dx$ .
- (26) Where do the horizontal tangent lines occur?
- (27) Where do the vertical tangent lines occur ( $dy/dx = \pm\infty$ )?
- (28) Determine  $d^2y/dx^2$ .

Consider the equation

$$(\cos x)y^2 + (3 \sin x - 1)y + (7x - 2) = 0$$

- (29) Check that  $x = 0, y = 2$  satisfies this equation.
- (30) Find  $dy/dx$  at the point  $(0, 2)$  using implicit differentiation.
- (31) Use the quadratic formula to solve for  $y$  in terms of  $x$ . (Should you use “+” or “-”? Why?)
- (32) Would you like to find  $dy/dx$  using that formula for  $y$ ? (Me neither...)

Find  $f'(x)$  in terms of  $g(x)$  and  $g'(x)$ , where  $g(x) > 0$  for all  $x$ . (Hint: if  $a$  is a constant then  $g(a)$  is constant.)

- (33)  $f(x) = g(x)^3$
- (34)  $f(x) = g(x)(x - a)$
- (35)  $f(x) = g(a)(x - a)$
- (36)  $f(x) = g(x + g(x))$
- (37)  $f(x) = \frac{g(x)}{x - a}$

- (38)  $f(x) = \frac{1}{g(x)}$
- (39)  $f(x) = g(xg(a))$
- (40)  $f(x) = \sqrt{g(x)^2}$
- (41)  $f(x) = \sqrt{g(x^2)}$
- (42)  $f(2x + 3) = g(x^2)$

## Logarithmic Differentiation

Use logarithmic differentiation to differentiate each function with respect to  $x$ .

1)  $y = 2x^{2x}$

2)  $y = 5x^{5x}$

3)  $y = 3x^{3x}$

4)  $y = 4x^{x^4}$

5)  $y = (3x^4 + 4)^3 \sqrt{5x^3 + 1}$

6)  $y = (x^5 + 5)^2 \sqrt{2x^2 + 3}$

7)  $y = \frac{(3x^4 - 2)^5}{(3x^3 + 4)^2}$

8)  $y = \sqrt{3x^2 + 1} (3x^4 + 1)^3$

$$9) y = \frac{\sqrt{2x^3 + 3}}{(x^4 - 3)^3}$$

$$10) y = (2x^2 - 5)^3 \sqrt{x^2 - 2}$$

**Use logarithmic differentiation to differentiate each function with respect to  $x$ . You do not need to simplify or substitute for  $y$ .**

$$11) y = \frac{(5x - 4)^4}{(3x^2 + 5)^5 \cdot (5x^4 - 3)^3}$$

$$12) y = (x + 2)^4 \cdot (2x - 5)^2 \cdot (5x + 1)^3$$

$$13) y = (5x^5 + 2)^2 \cdot (3x^3 - 1)^3 \cdot (3x - 1)^4$$

$$14) y = \frac{(x^2 + 3)^4}{(5x^5 - 2)^5 \cdot (3x^2 - 5)^2}$$

$$15) y = (3x^3 - 4)^5 \cdot (3x - 1)^3 \cdot (5x^3 - 2)^2 \cdot (x + 3)^4$$

$$16) y = \frac{(4x^2 - 5)^2}{(2x - 3)^4 \cdot (5x^4 - 2)^5 \cdot (3x^2 - 4)^3}$$

## Logarithmic Differentiation

Use logarithmic differentiation to differentiate each function with respect to  $x$ .

1)  $y = 2x^{2x}$

$$\begin{aligned}\frac{dy}{dx} &= y(2 \ln x + 2) \\ &= 4x^{2x}(\ln x + 1)\end{aligned}$$

2)  $y = 5x^{5x}$

$$\begin{aligned}\frac{dy}{dx} &= y(5 \ln x + 5) \\ &= 25x^{5x}(\ln x + 1)\end{aligned}$$

3)  $y = 3x^{3x}$

$$\begin{aligned}\frac{dy}{dx} &= y(3 \ln x + 3) \\ &= 9x^{3x}(\ln x + 1)\end{aligned}$$

4)  $y = 4x^{x^4}$

$$\begin{aligned}\frac{dy}{dx} &= y(4x^3 \ln x + x^3) \\ &= 4x^{x^4+3}(4 \ln x + 1)\end{aligned}$$

5)  $y = (3x^4 + 4)^3 \sqrt{5x^3 + 1}$

$$\begin{aligned}\frac{dy}{dx} &= y \left( \frac{36x^3}{3x^4 + 4} + \frac{15x^2}{10x^3 + 2} \right) \\ &= \frac{3x^2(3x^4 + 4)^2(135x^4 + 24x + 20)}{2\sqrt{5x^3 + 1}}\end{aligned}$$

6)  $y = (x^5 + 5)^2 \sqrt{2x^2 + 3}$

$$\begin{aligned}\frac{dy}{dx} &= y \left( \frac{10x^4}{x^5 + 5} + \frac{2x}{2x^2 + 3} \right) \\ &= \frac{2x(x^5 + 5)(11x^5 + 15x^3 + 5)}{\sqrt{2x^2 + 3}}\end{aligned}$$

7)  $y = \frac{(3x^4 - 2)^5}{(3x^3 + 4)^2}$

$$\begin{aligned}\frac{dy}{dx} &= y \left( \frac{60x^3}{3x^4 - 2} - \frac{18x^2}{3x^3 + 4} \right) \\ &= \frac{6x^2(3x^4 - 2)^4(21x^4 + 40x + 6)}{(3x^3 + 4)^3}\end{aligned}$$

8)  $y = \sqrt{3x^2 + 1} (3x^4 + 1)^3$

$$\begin{aligned}\frac{dy}{dx} &= y \left( \frac{3x}{3x^2 + 1} + \frac{36x^3}{3x^4 + 1} \right) \\ &= \frac{3x(3x^4 + 1)^2(39x^4 + 1 + 12x^2)}{\sqrt{3x^2 + 1}}\end{aligned}$$

$$9) y = \frac{\sqrt{2x^3 + 3}}{(x^4 - 3)^3}$$

$$\begin{aligned} \frac{dy}{dx} &= y \left( \frac{3x^2}{2x^3 + 3} - \frac{12x^3}{x^4 - 3} \right) \\ &= \frac{3x^2(-7x^4 - 3 - 12x)}{(x^4 - 3)^4 \sqrt{2x^3 + 3}} \end{aligned}$$

$$10) y = (2x^2 - 5)^3 \sqrt{x^2 - 2}$$

$$\begin{aligned} \frac{dy}{dx} &= y \left( \frac{12x}{2x^2 - 5} + \frac{x}{x^2 - 2} \right) \\ &= \frac{x(2x^2 - 5)^2(14x^2 - 29)}{\sqrt{x^2 - 2}} \end{aligned}$$

Use logarithmic differentiation to differentiate each function with respect to  $x$ . You do not need to simplify or substitute for  $y$ .

$$11) y = \frac{(5x - 4)^4}{(3x^2 + 5)^5 \cdot (5x^4 - 3)^3}$$

$$\frac{dy}{dx} = y \left( \frac{20}{5x - 4} - \frac{30x}{3x^2 + 5} - \frac{60x^3}{5x^4 - 3} \right)$$

$$12) y = (x + 2)^4 \cdot (2x - 5)^2 \cdot (5x + 1)^3$$

$$\frac{dy}{dx} = y \left( \frac{4}{x + 2} + \frac{4}{2x - 5} + \frac{15}{5x + 1} \right)$$

$$13) y = (5x^5 + 2)^2 \cdot (3x^3 - 1)^3 \cdot (3x - 1)^4$$

$$\frac{dy}{dx} = y \left( \frac{50x^4}{5x^5 + 2} + \frac{27x^2}{3x^3 - 1} + \frac{12}{3x - 1} \right)$$

$$14) y = \frac{(x^2 + 3)^4}{(5x^5 - 2)^5 \cdot (3x^2 - 5)^2}$$

$$\frac{dy}{dx} = y \left( \frac{8x}{x^2 + 3} - \frac{125x^4}{5x^5 - 2} - \frac{12x}{3x^2 - 5} \right)$$

$$15) y = (3x^3 - 4)^5 \cdot (3x - 1)^3 \cdot (5x^3 - 2)^2 \cdot (x + 3)^4$$

$$\frac{dy}{dx} = y \left( \frac{45x^2}{3x^3 - 4} + \frac{9}{3x - 1} + \frac{30x^2}{5x^3 - 2} + \frac{4}{x + 3} \right)$$

$$16) y = \frac{(4x^2 - 5)^2}{(2x - 3)^4 \cdot (5x^4 - 2)^5 \cdot (3x^2 - 4)^3}$$

$$\frac{dy}{dx} = y \left( \frac{16x}{4x^2 - 5} - \frac{8}{2x - 3} - \frac{100x^3}{5x^4 - 2} - \frac{18x}{3x^2 - 4} \right)$$

**6.4 EXPONENTIAL GROWTH AND DECAY**

In many applications, the rate of change of a variable  $y$  is proportional to the value of  $y$ . If  $y$  is a function of time  $t$ , we can express this statement as

*Example:* Find the solution to this differential equation given the initial condition that  $y = y_0$  when  $t = 0$ .  
(This is the derivation of an exponential function ... see notecards)

**Exponential Growth and Decay Model**

If  $y$  changes at a rate proportional to the amount present ( $\frac{dy}{dt} = ky$ ) and  $y = y_0$  when  $t = 0$ , then

$$y = y_0 e^{kt}$$

where  $k$  is the **proportional constant**.

Exponential **growth** occurs when  $k > 0$ , and exponential **decay** occurs when  $k < 0$ .

*Example:* The rate of change of  $y$  is proportional to  $y$ . When  $t = 0$ ,  $y = 2$ . When  $t = 2$ ,  $y = 4$ . What is the value of  $y$  when  $t = 3$ ?

*Example:* [1985 AP Calculus BC #33] If  $\frac{dy}{dt} = -2y$  and if  $y = 1$  when  $t = 0$ , what is the value of  $t$  for which  $y = \frac{1}{2}$  ?

A)  $-\frac{1}{2} \ln 2$

B)  $-\frac{1}{4}$


C)  $\frac{1}{2} \ln 2$

D)  $\frac{\sqrt{2}}{2}$

E)  $\ln 2$



*Example: **Radioactive Decay:*** The rate at which a radioactive element decays (as measured by the number of nuclei that change per unit of time) is approximately proportional to the amount of nuclei present. Suppose that 10 grams of the plutonium isotope Pu-239 was released in the Chernobyl nuclear accident. How long will it take for the 10 grams to decay to 1 gram? [Pu-239 has a half life of 24,360 years]



*Example: **Newton's Law of Cooling:*** Newton's Law of Cooling states that the rate of change in the temperature of an object is proportional to the difference between the object's temperature and the temperature in the surrounding medium. A detective finds a murder victim at 9 am. The temperature of the body is measured at 90.3 °F. One hour later, the temperature of the body is 89.0 °F. The temperature of the room has been maintained at a constant 68 °F.

(a) Assuming the temperature,  $T$ , of the body obeys Newton's Law of Cooling, write a differential equation for  $T$ .



(b) Solve the differential equation to estimate the time the murder occurred.

*Example:* [1988 AP Calculus BC #43] Bacteria in a certain culture increase at rate proportional to the number present. If the number of bacteria doubles in three hours, in how many hours will the number of bacteria triple?

- A)  $\frac{3\ln 3}{\ln 2}$       B)  $\frac{2\ln 3}{\ln 2}$       C)  $\frac{\ln 3}{\ln 2}$       D)  $\ln\left(\frac{27}{2}\right)$       E)  $\ln\left(\frac{9}{2}\right)$

*Example:* [AP Calculus 1993 AB #42] A puppy weighs 2.0 pounds at birth and 3.5 pounds two months later. If the weight of the puppy during its first 6 months is increasing at a rate proportional to its weight, then how much will the puppy weigh when it is 3 months old?

- A) 4.2 pounds      B) 4.6 pounds      C) 4.8 pounds      D) 5.6 pounds      E) 6.5 pounds

*Example:* [1993 AP Calculus BC #38] During a certain epidemic, the number of people that are infected at any time increases at rate proportional to the number of people that are infected at that time. If 1,000 people are infected when the epidemic is first discovered, and 1,200 are infected 7 days later, how many people are infected 12 days after the epidemic is first discovered?

- A) 343      B) 1,343      C) 1,367      D) 1,400      E) 2,057

*Example:* [1998 AP Calculus AB #84] Population  $y$  grows according to the equation  $\frac{dy}{dt} = ky$ , where  $k$  is a constant and  $t$  is measured in years. If the population doubles every 10 years, then the value of  $k$  is

- A) 0.069      B) 0.200      C) 0.301      D) 3.322      E) 5.000

*Notecards from Section 6.4:* Derivation of an exponential function

## Related Rates

**Solve each related rate problem.**

- 1) Water leaking onto a floor forms a circular pool. The radius of the pool increases at a rate of 4 cm/min. How fast is the area of the pool increasing when the radius is 5 cm?
  
  
  
  
  
  
  
  
  
  
  
  
  
  
  
  
  
  
  
  
  
  
- 2) Oil spilling from a ruptured tanker spreads in a circle on the surface of the ocean. The area of the spill increases at a rate of  $9\pi$  m<sup>2</sup>/min. How fast is the radius of the spill increasing when the radius is 10 m?
  
  
  
  
  
  
  
  
  
  
  
  
  
  
  
  
  
  
  
  
  
  
- 3) A conical paper cup is 10 cm tall with a radius of 10 cm. The cup is being filled with water so that the water level rises at a rate of 2 cm/sec. At what rate is water being poured into the cup when the water level is 8 cm?

- 4) A spherical balloon is inflated so that its radius ( $r$ ) increases at a rate of  $\frac{2}{r}$  cm/sec. How fast is the volume of the balloon increasing when the radius is 4 cm?
- 5) A 7 ft tall person is walking away from a 20 ft tall lamppost at a rate of 5 ft/sec. Assume the scenario can be modeled with right triangles. At what rate is the length of the person's shadow changing when the person is 16 ft from the lamppost?
- 6) An observer stands 700 ft away from a launch pad to observe a rocket launch. The rocket blasts off and maintains a velocity of 900 ft/sec. Assume the scenario can be modeled as a right triangle. How fast is the observer to rocket distance changing when the rocket is 2400 ft from the ground?

## Related Rates

**Solve each related rate problem.**

- 1) Water leaking onto a floor forms a circular pool. The radius of the pool increases at a rate of 4 cm/min. How fast is the area of the pool increasing when the radius is 5 cm?

$A$  = area of circle    $r$  = radius    $t$  = time

Equation:  $A = \pi r^2$    Given rate:  $\frac{dr}{dt} = 4$    Find:  $\frac{dA}{dt} \Big|_{r=5}$

$$\frac{dA}{dt} \Big|_{r=5} = 2\pi r \cdot \frac{dr}{dt} = 40\pi \text{ cm}^2/\text{min}$$

- 2) Oil spilling from a ruptured tanker spreads in a circle on the surface of the ocean. The area of the spill increases at a rate of  $9\pi$  m<sup>2</sup>/min. How fast is the radius of the spill increasing when the radius is 10 m?

$A$  = area of circle    $r$  = radius    $t$  = time

Equation:  $A = \pi r^2$    Given rate:  $\frac{dA}{dt} = 9\pi$    Find:  $\frac{dr}{dt} \Big|_{r=10}$

$$\frac{dr}{dt} \Big|_{r=10} = \frac{1}{2\pi r} \cdot \frac{dA}{dt} = \frac{9}{20} \text{ m/min}$$

- 3) A conical paper cup is 10 cm tall with a radius of 10 cm. The cup is being filled with water so that the water level rises at a rate of 2 cm/sec. At what rate is water being poured into the cup when the water level is 8 cm?

$V$  = volume of material in cone    $h$  = height    $t$  = time

Equation:  $V = \frac{\pi h^3}{3}$    Given rate:  $\frac{dh}{dt} = 2$    Find:  $\frac{dV}{dt} \Big|_{h=8}$

$$\frac{dV}{dt} \Big|_{h=8} = \pi h^2 \cdot \frac{dh}{dt} = 128\pi \text{ cm}^3/\text{sec}$$

- 4) A spherical balloon is inflated so that its radius ( $r$ ) increases at a rate of  $\frac{2}{r}$  cm/sec. How fast is the volume of the balloon increasing when the radius is 4 cm?

$V$  = volume of sphere    $r$  = radius    $t$  = time

Equation:  $V = \frac{4}{3}\pi r^3$    Given rate:  $\frac{dr}{dt} = \frac{2}{r}$    Find:  $\frac{dV}{dt} \Big|_{r=4}$

$$\frac{dV}{dt} \Big|_{r=4} = 4\pi r^2 \cdot \frac{dr}{dt} = 32\pi \text{ cm}^3/\text{sec}$$

- 5) A 7 ft tall person is walking away from a 20 ft tall lamppost at a rate of 5 ft/sec. Assume the scenario can be modeled with right triangles. At what rate is the length of the person's shadow changing when the person is 16 ft from the lamppost?

$x$  = distance from person to lamppost    $y$  = length of shadow    $t$  = time

Equation:  $\frac{x+y}{20} = \frac{y}{7}$    Given rate:  $\frac{dx}{dt} = 5$    Find:  $\frac{dy}{dt} \Big|_{x=16}$

$$\frac{dy}{dt} \Big|_{x=16} = \frac{7}{13} \cdot \frac{dx}{dt} = \frac{35}{13} \text{ ft/sec}$$

- 6) An observer stands 700 ft away from a launch pad to observe a rocket launch. The rocket blasts off and maintains a velocity of 900 ft/sec. Assume the scenario can be modeled as a right triangle. How fast is the observer to rocket distance changing when the rocket is 2400 ft from the ground?

$a$  = altitude of rocket    $z$  = distance from observer to rocket    $t$  = time

Equation:  $a^2 + 490000 = z^2$    Given rate:  $\frac{da}{dt} = 900$    Find:  $\frac{dz}{dt} \Big|_{a=2400}$

$$\frac{dz}{dt} \Big|_{a=2400} = \frac{a}{z} \cdot \frac{da}{dt} = 864 \text{ ft/sec}$$

## 4.6 Related Rates

© 2013 Kuta Software LLC. All rights reserved.

**Solve each related rate problem.**

- 1) A spherical balloon is deflated so that its radius decreases at a rate of 4 cm/sec. At what rate is the volume of the balloon changing when the radius is 3 cm?
- 2) A spherical balloon is deflated at a rate of  $\frac{256\pi}{3}$  cm<sup>3</sup>/sec. At what rate is the radius of the balloon changing when the radius is 8 cm?
- 3) Water leaking onto a floor forms a circular pool. The radius of the pool increases at a rate of 9 cm/min. How fast is the area of the pool increasing when the radius is 12 cm?
- 4) A 7 ft tall person is walking towards a 17 ft tall lamppost at a rate of 4 ft/sec. Assume the scenario can be modeled with right triangles. At what rate is the length of the person's shadow changing when the person is 12 ft from the lamppost?
- 5) A conical paper cup is 30 cm tall with a radius of 10 cm. The cup is being filled with water at a rate of  $\frac{2\pi}{3}$  cm<sup>3</sup>/sec. How fast is the water level rising when the water level is 2 cm?
- 6) A 13 ft ladder is leaning against a wall and sliding towards the floor. The top of the ladder is sliding down the wall at a rate of 7 ft/sec. How fast is the base of the ladder sliding away from the wall when the base of the ladder is 12 ft from the wall?
- 7) Oil spilling from a ruptured tanker spreads in a circle on the surface of the ocean. The radius of the spill increases at a rate of 2 m/min. How fast is the area of the spill increasing when the radius is 13 m?
- 8) A hypothetical cube shrinks so that the length of its sides are decreasing at a rate of 2 m/min. At what rate is the volume of the cube changing when the sides are 2 m each?
- 9) A conical paper cup is 10 cm tall with a radius of 10 cm. The bottom of the cup is punctured so that the water level goes down at a rate of 2 cm/sec. At what rate is the volume of water in the cup changing when the water level is 9 cm?
- 10) An observer stands 500 ft away from a launch pad to observe a rocket launch. The rocket blasts off and maintains a velocity of 700 ft/sec. Assume the scenario can be modeled as a right triangle. How fast is the observer to rocket distance changing when the rocket is 1200 ft from the ground?
- 11) A spherical snowball melts at a rate of  $36\pi$  in<sup>3</sup>/sec. At what rate is the radius of the snowball changing when the radius is 5 in?

- 12) A hypothetical cube grows at a rate of  $8 \text{ m}^3/\text{min}$ . How fast are the sides of the cube increasing when the sides are 2 m each?
- 13) A conical paper cup is 10 cm tall with a radius of 30 cm. The cup is being filled with water so that the water level rises at a rate of 2 cm/sec. At what rate is water being poured into the cup when the water level is 9 cm?
- 14) Water slowly evaporates from a circular shaped puddle. The radius of the puddle decreases at a rate of 8 in/hr. Assuming the puddle retains its circular shape, at what rate is the area of the puddle changing when the radius is 3 in?
- 15) A hypothetical square grows so that the length of its diagonals are increasing at a rate of 4 m/min. How fast is the area of the square increasing when the diagonals are 14 m each?
- 16) Water slowly evaporates from a circular shaped puddle. The area of the puddle decreases at a rate of  $16\pi \text{ in}^2/\text{hr}$ . Assuming the puddle retains its circular shape, at what rate is the radius of the puddle changing when the radius is 12 in?
- 17) A hypothetical cube grows so that the length of its sides are increasing at a rate of 4 m/min. How fast is the volume of the cube increasing when the sides are 7 m each?
- 18) A hypothetical square grows at a rate of  $16 \text{ m}^2/\text{min}$ . How fast are the sides of the square increasing when the sides are 15 m each?
- 19) A hypothetical cube shrinks at a rate of  $8 \text{ m}^3/\text{min}$ . At what rate are the sides of the cube changing when the sides are 3 m each?
- 20) A spherical snowball melts so that its radius decreases at a rate of 4 in/sec. At what rate is the volume of the snowball changing when the radius is 8 in?
- 21) A perfect cube shaped ice cube melts so that the length of its sides are decreasing at a rate of 2 mm/sec. Assume that the block retains its cube shape as it melts. At what rate is the volume of the ice cube changing when the sides are 2 mm each?
- 22) A conical paper cup is 10 cm tall with a radius of 10 cm. The bottom of the cup is punctured so that the water leaks out at a rate of  $\frac{9\pi}{4} \text{ cm}^3/\text{sec}$ . At what rate is the water level changing when the water level is 6 cm?
- 23) A hypothetical square shrinks so that the length of its diagonals are changing at a rate of  $-8 \text{ m}/\text{min}$ . At what rate is the area of the square changing when the diagonals are 5 m each?
- 24) A hypothetical square shrinks at a rate of  $2 \text{ m}^2/\text{min}$ . At what rate are the diagonals of the square changing when the diagonals are 7 m each?
- 25) Water leaking onto a floor forms a circular pool. The area of the pool increases at a rate of  $25\pi \text{ cm}^2/\text{min}$ . How fast is the radius of the pool increasing when the radius is 6 cm?



## Answers to 4.6 Related Rates

1)  $V =$  volume of sphere  $r =$  radius  $t =$  time

$$\text{Equation: } V = \frac{4}{3}\pi r^3 \quad \text{Given rate: } \frac{dr}{dt} = -4 \quad \text{Find: } \left. \frac{dV}{dt} \right|_{r=3}$$

$$\left. \frac{dV}{dt} \right|_{r=3} = 4\pi r^2 \cdot \frac{dr}{dt} = -144\pi \text{ cm}^3/\text{sec}$$

2)  $V =$  volume of sphere  $r =$  radius  $t =$  time

$$\text{Equation: } V = \frac{4}{3}\pi r^3 \quad \text{Given rate: } \frac{dV}{dt} = -\frac{256\pi}{3} \quad \text{Find: } \left. \frac{dr}{dt} \right|_{r=8}$$

$$\left. \frac{dr}{dt} \right|_{r=8} = \frac{1}{4\pi r^2} \cdot \frac{dV}{dt} = -\frac{1}{3} \text{ cm/sec}$$

3)  $A =$  area of circle  $r =$  radius  $t =$  time

$$\text{Equation: } A = \pi r^2 \quad \text{Given rate: } \frac{dr}{dt} = 9 \quad \text{Find: } \left. \frac{dA}{dt} \right|_{r=12}$$

$$\left. \frac{dA}{dt} \right|_{r=12} = 2\pi r \cdot \frac{dr}{dt} = 216\pi \text{ cm}^2/\text{min}$$

4)  $x =$  distance from person to lamppost  $y =$  length of shadow  $t =$  time

$$\text{Equation: } \frac{x+y}{17} = \frac{y}{7} \quad \text{Given rate: } \frac{dx}{dt} = -4 \quad \text{Find: } \left. \frac{dy}{dt} \right|_{x=12}$$

$$\left. \frac{dy}{dt} \right|_{x=12} = \frac{7}{10} \cdot \frac{dx}{dt} = -\frac{14}{5} \text{ ft/sec}$$

5)  $V =$  volume of material in cone  $h =$  height  $t =$  time

$$\text{Equation: } V = \frac{\pi h^3}{27} \quad \text{Given rate: } \frac{dV}{dt} = \frac{2\pi}{3} \quad \text{Find: } \left. \frac{dh}{dt} \right|_{h=2}$$

$$\left. \frac{dh}{dt} \right|_{h=2} = \frac{9}{\pi h^2} \cdot \frac{dV}{dt} = \frac{3}{2} \text{ cm/sec}$$

6)  $x =$  horizontal distance from base of ladder to wall  $y =$  vertical distance from top of ladder to floor  $t =$  time

$$\text{Equation: } x^2 + y^2 = 13^2 \quad \text{Given rate: } \frac{dy}{dt} = -7 \quad \text{Find: } \left. \frac{dx}{dt} \right|_{x=12}$$

$$\left. \frac{dx}{dt} \right|_{x=12} = -\frac{y}{x} \cdot \frac{dy}{dt} = \frac{91}{12} \text{ ft/sec}$$

7)  $A =$  area of circle  $r =$  radius  $t =$  time

$$\text{Equation: } A = \pi r^2 \quad \text{Given rate: } \frac{dr}{dt} = 2 \quad \text{Find: } \left. \frac{dA}{dt} \right|_{r=13}$$

$$\left. \frac{dA}{dt} \right|_{r=13} = 2\pi r \cdot \frac{dr}{dt} = 52\pi \text{ m}^2/\text{min}$$

8)  $V =$  volume of cube  $s =$  length of sides  $t =$  time

$$\text{Equation: } V = s^3 \quad \text{Given rate: } \frac{ds}{dt} = -2 \quad \text{Find: } \left. \frac{dV}{dt} \right|_{s=2}$$

$$\left. \frac{dV}{dt} \right|_{s=2} = 3s^2 \cdot \frac{ds}{dt} = -24 \text{ m}^3/\text{min}$$

9)  $V =$  volume of material in cone  $h =$  height  $t =$  time

$$\text{Equation: } V = \frac{\pi h^3}{3} \quad \text{Given rate: } \frac{dh}{dt} = -2 \quad \text{Find: } \left. \frac{dV}{dt} \right|_{h=9}$$

$$\left. \frac{dV}{dt} \right|_{h=9} = \pi h^2 \cdot \frac{dh}{dt} = -162\pi \text{ cm}^3/\text{sec}$$

10)  $a =$  altitude of rocket  $z =$  distance from observer to rocket  $t =$  time

$$\text{Equation: } a^2 + 250000 = z^2 \quad \text{Given rate: } \frac{da}{dt} = 700 \quad \text{Find: } \left. \frac{dz}{dt} \right|_{a=1200}$$

$$\left. \frac{dz}{dt} \right|_{a=1200} = \frac{a}{z} \cdot \frac{da}{dt} = \frac{8400}{13} \text{ ft/sec}$$

11)  $V =$  volume of sphere  $r =$  radius  $t =$  time

$$\text{Equation: } V = \frac{4}{3}\pi r^3 \quad \text{Given rate: } \frac{dV}{dt} = -36\pi \quad \text{Find: } \left. \frac{dr}{dt} \right|_{r=5}$$

$$\left. \frac{dr}{dt} \right|_{r=5} = \frac{1}{4\pi r^2} \cdot \frac{dV}{dt} = -\frac{9}{25} \text{ in/s}$$

12)  $V =$  volume of cube  $s =$  length of sides  $t =$  time

$$\text{Equation: } V = s^3 \quad \text{Given rate: } \frac{dV}{dt} = 8 \quad \text{Find: } \left. \frac{ds}{dt} \right|_{s=2}$$

$$\left. \frac{ds}{dt} \right|_{s=2} = \frac{1}{3s^2} \cdot \frac{dV}{dt} = \frac{2}{3} \text{ m/min}$$

13)  $V =$  volume of material in cone  $h =$  height  $t =$  time

$$\text{Equation: } V = 3\pi h^3 \quad \text{Given rate: } \frac{dh}{dt} = 2 \quad \text{Find: } \left. \frac{dV}{dt} \right|_{h=9}$$

$$\left. \frac{dV}{dt} \right|_{h=9} = 9\pi h^2 \cdot \frac{dh}{dt} = 1458\pi \text{ cm}^3/\text{sec}$$

14)  $A =$  area of circle  $r =$  radius  $t =$  time

$$\text{Equation: } A = \pi r^2 \quad \text{Given rate: } \frac{dr}{dt} = -8 \quad \text{Find: } \left. \frac{dA}{dt} \right|_{r=3}$$

$$\left. \frac{dA}{dt} \right|_{r=3} = 2\pi r \cdot \frac{dr}{dt} = -48\pi \text{ in}^2/\text{hr}$$

15)  $A$  = area of square  $x$  = length of diagonals  $t$  = time

$$\text{Equation: } A = \frac{x^2}{2} \quad \text{Given rate: } \frac{dx}{dt} = 4 \quad \text{Find: } \left. \frac{dA}{dt} \right|_{x=14}$$

$$\left. \frac{dA}{dt} \right|_{x=14} = x \cdot \frac{dx}{dt} = 56 \text{ m}^2/\text{min}$$

16)  $A$  = area of circle  $r$  = radius  $t$  = time

$$\text{Equation: } A = \pi r^2 \quad \text{Given rate: } \frac{dA}{dt} = -16\pi \quad \text{Find: } \left. \frac{dr}{dt} \right|_{r=12}$$

$$\left. \frac{dr}{dt} \right|_{r=12} = \frac{1}{2\pi r} \cdot \frac{dA}{dt} = -\frac{2}{3} \text{ in/hr}$$

17)  $V$  = volume of cube  $s$  = length of sides  $t$  = time

$$\text{Equation: } V = s^3 \quad \text{Given rate: } \frac{ds}{dt} = 4 \quad \text{Find: } \left. \frac{dV}{dt} \right|_{s=7}$$

$$\left. \frac{dV}{dt} \right|_{s=7} = 3s^2 \cdot \frac{ds}{dt} = 588 \text{ m}^3/\text{min}$$

18)  $A$  = area of square  $s$  = length of sides  $t$  = time

$$\text{Equation: } A = s^2 \quad \text{Given rate: } \frac{dA}{dt} = 16 \quad \text{Find: } \left. \frac{ds}{dt} \right|_{s=15}$$

$$\left. \frac{ds}{dt} \right|_{s=15} = \frac{1}{2s} \cdot \frac{dA}{dt} = \frac{8}{15} \text{ m/min}$$

19)  $V$  = volume of cube  $s$  = length of sides  $t$  = time

$$\text{Equation: } V = s^3 \quad \text{Given rate: } \frac{dV}{dt} = -8 \quad \text{Find: } \left. \frac{ds}{dt} \right|_{s=3}$$

$$\left. \frac{ds}{dt} \right|_{s=3} = \frac{1}{3s^2} \cdot \frac{dV}{dt} = -\frac{8}{27} \text{ m/min}$$

20)  $V$  = volume of sphere  $r$  = radius  $t$  = time

$$\text{Equation: } V = \frac{4}{3}\pi r^3 \quad \text{Given rate: } \frac{dr}{dt} = -4 \quad \text{Find: } \left. \frac{dV}{dt} \right|_{r=8}$$

$$\left. \frac{dV}{dt} \right|_{r=8} = 4\pi r^2 \cdot \frac{dr}{dt} = -1024\pi \text{ in}^3/\text{sec}$$

21)  $V$  = volume of cube  $s$  = length of sides  $t$  = time

$$\text{Equation: } V = s^3 \quad \text{Given rate: } \frac{ds}{dt} = -2 \quad \text{Find: } \left. \frac{dV}{dt} \right|_{s=2}$$

$$\left. \frac{dV}{dt} \right|_{s=2} = 3s^2 \cdot \frac{ds}{dt} = -24 \text{ mm}^3/\text{sec}$$

22)  $V =$  volume of material in cone  $h =$  height  $t =$  time  
 Equation:  $V = \frac{\pi h^3}{3}$  Given rate:  $\frac{dV}{dt} = -\frac{9\pi}{4}$  Find:  $\left. \frac{dh}{dt} \right|_{h=6}$

$$\left. \frac{dh}{dt} \right|_{h=6} = \frac{1}{\pi h^2} \cdot \frac{dV}{dt} = -\frac{1}{16} \text{ cm/sec}$$

23)  $A =$  area of square  $x =$  length of diagonals  $t =$  time  
 Equation:  $A = \frac{x^2}{2}$  Given rate:  $\frac{dx}{dt} = -8$  Find:  $\left. \frac{dA}{dt} \right|_{x=5}$

$$\left. \frac{dA}{dt} \right|_{x=5} = x \cdot \frac{dx}{dt} = -40 \text{ m}^2/\text{min}$$

24)  $A =$  area of square  $x =$  length of diagonals  $t =$  time  
 Equation:  $A = \frac{x^2}{2}$  Given rate:  $\frac{dA}{dt} = -2$  Find:  $\left. \frac{dx}{dt} \right|_{x=7}$

$$\left. \frac{dx}{dt} \right|_{x=7} = \frac{1}{x} \cdot \frac{dA}{dt} = -\frac{2}{7} \text{ m/min}$$

25)  $A =$  area of circle  $r =$  radius  $t =$  time  
 Equation:  $A = \pi r^2$  Given rate:  $\frac{dA}{dt} = 25\pi$  Find:  $\left. \frac{dr}{dt} \right|_{r=6}$

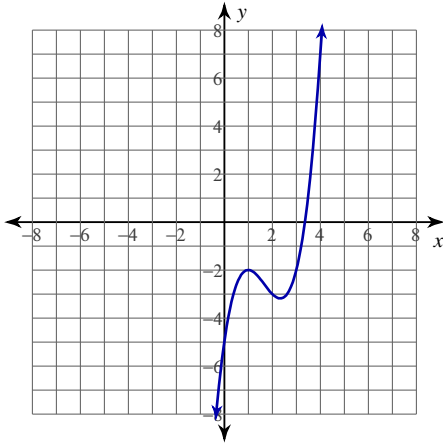
$$\left. \frac{dr}{dt} \right|_{r=6} = \frac{1}{2\pi r} \cdot \frac{dA}{dt} = \frac{25}{12} \text{ cm/min}$$

## Assignment

Date \_\_\_\_\_ Period \_\_\_\_\_

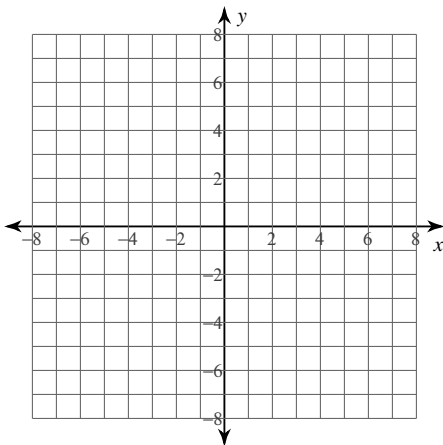
For each problem, find all points of relative minima and maxima.

1)  $y = x^3 - 5x^2 + 7x - 5$



For each problem, find all points of relative minima and maxima. You may use the provided graph to sketch the function.

2)  $y = x^3 - 6x^2 + 9x + 1$



**For each problem, find all points of relative minima and maxima.**

3)  $y = -x^3 - 3x^2 - 1$

4)  $y = x^4 - 2x^2 + 3$

5)  $y = x^4 - x^2$

6)  $y = -\frac{2}{x^2 - 4}$

7)  $y = (2x - 8)^{\frac{2}{3}}$

8)  $y = -\frac{1}{5}(x - 4)^{\frac{5}{3}} - 2(x - 4)^{\frac{2}{3}}$

**Critical thinking questions:**

9) Give an example function  $f(x)$  where  $f''(0) = 0$  and there is no relative minimum or maximum at  $x = 0$ .

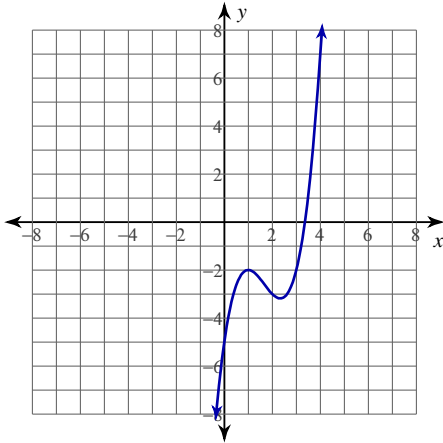
10) Give an example function  $f(x)$  where  $f''(0) = 0$  and there is a relative maximum at  $x = 0$ .

## Assignment

Date \_\_\_\_\_ Period \_\_\_\_\_

For each problem, find all points of relative minima and maxima.

1)  $y = x^3 - 5x^2 + 7x - 5$

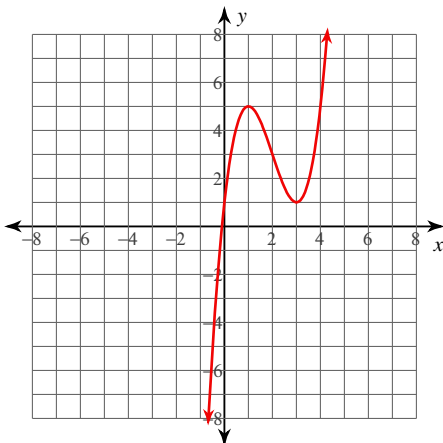


Relative minimum:  $\left(\frac{7}{3}, -\frac{86}{27}\right)$

Relative maximum:  $(1, -2)$

For each problem, find all points of relative minima and maxima. You may use the provided graph to sketch the function.

2)  $y = x^3 - 6x^2 + 9x + 1$



Relative minimum:  $(3, 1)$

Relative maximum:  $(1, 5)$

For each problem, find all points of relative minima and maxima.

3)  $y = -x^3 - 3x^2 - 1$

Relative minimum:  $(-2, -5)$

Relative maximum:  $(0, -1)$

4)  $y = x^4 - 2x^2 + 3$

Relative minima:  $(-1, 2), (1, 2)$

Relative maximum:  $(0, 3)$

5)  $y = x^4 - x^2$

Relative minima:  $\left(-\frac{\sqrt{2}}{2}, -\frac{1}{4}\right), \left(\frac{\sqrt{2}}{2}, -\frac{1}{4}\right)$

Relative maximum:  $(0, 0)$

6)  $y = -\frac{2}{x^2 - 4}$

Relative minimum:  $\left(0, \frac{1}{2}\right)$

No relative maxima.

7)  $y = (2x - 8)^{\frac{2}{3}}$

Relative minimum:  $(4, 0)$

No relative maxima.

8)  $y = -\frac{1}{5}(x - 4)^{\frac{5}{3}} - 2(x - 4)^{\frac{2}{3}}$

Relative minimum:  $\left(0, -\frac{12\sqrt[3]{2}}{5}\right)$

Relative maximum:  $(4, 0)$

**Critical thinking questions:**

9) Give an example function  $f(x)$  where  $f''(0) = 0$  and there is no relative minimum or maximum at  $x = 0$ .

Many answers. Ex:  $f(x) = 0, x, x^3, \text{ etc}$

10) Give an example function  $f(x)$  where  $f''(0) = 0$  and there is a relative maximum at  $x = 0$ .

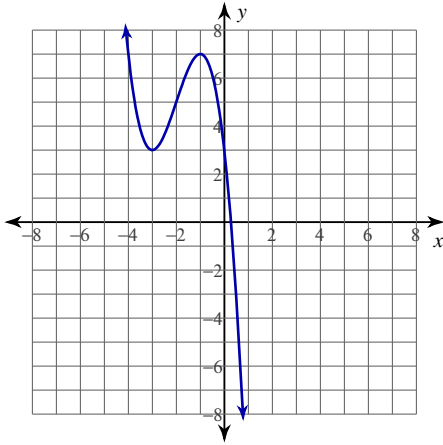
Many answers. Ex:  $f(x) = -x^4$



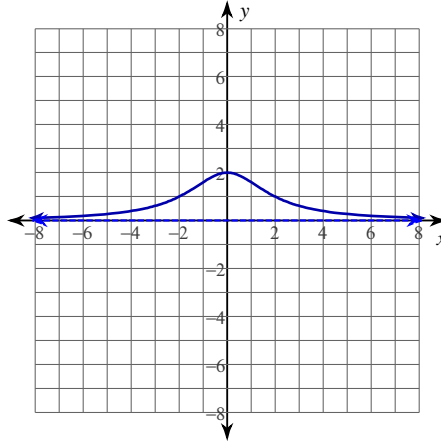
## Absolute Extrema

For each problem, find all points of absolute minima and maxima on the given closed interval.

1)  $y = -x^3 - 6x^2 - 9x + 3; [-3, -1]$



2)  $y = \frac{8}{x^2 + 4}; [0, 5]$



3)  $y = x^3 + 6x^2 + 9x + 3; [-4, 0]$

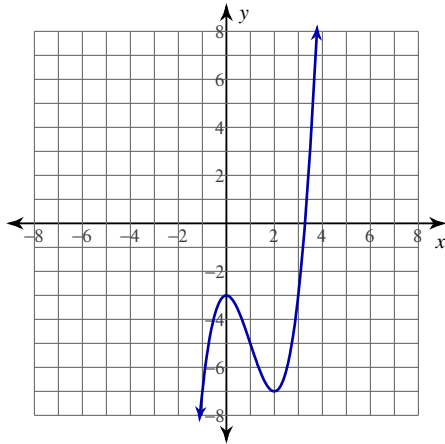
4)  $y = x^4 - 3x^2 + 4; [-1, 1]$

5)  $y = \frac{x^2}{3x - 6}; [3, 6]$

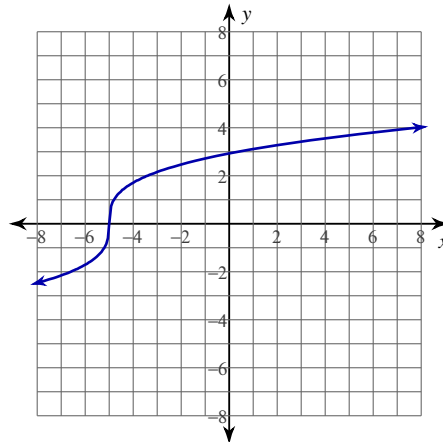
6)  $y = (x + 2)^{\frac{2}{3}}; [-4, -2]$

For each problem, find all points of absolute minima and maxima on the given interval.

7)  $y = x^3 - 3x^2 - 3$ ;  $(0, 3)$



8)  $y = (5x + 25)^{\frac{1}{3}}$ ;  $[-2, 2]$



9)  $y = x^3 - 3x^2 + 6$ ;  $[0, \infty)$

10)  $y = x^4 - 2x^2 - 3$ ;  $(0, \infty)$

11)  $y = \frac{4}{x^2 + 2}$ ;  $(-5, -2]$

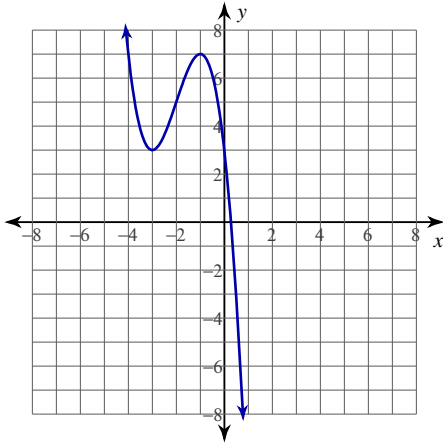
12)  $y = -\frac{1}{6}(x+1)^{\frac{7}{3}} + \frac{14}{3}(x+1)^{\frac{1}{3}}$ ;  $(-5, 0)$

## Absolute Extrema

Date \_\_\_\_\_ Period \_\_\_\_\_

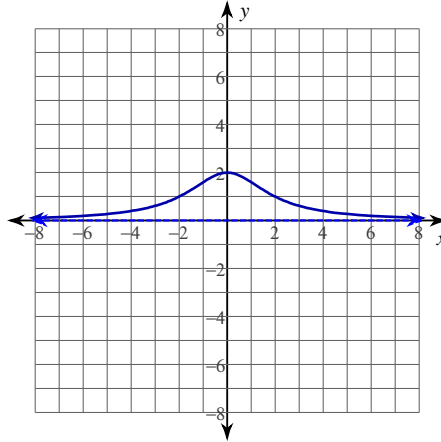
For each problem, find all points of absolute minima and maxima on the given closed interval.

1)  $y = -x^3 - 6x^2 - 9x + 3$ ;  $[-3, -1]$



Absolute minimum:  $(-3, 3)$   
 Absolute maximum:  $(-1, 7)$

2)  $y = \frac{8}{x^2 + 4}$ ;  $[0, 5]$



Absolute minimum:  $(5, \frac{8}{29})$   
 Absolute maximum:  $(0, 2)$

3)  $y = x^3 + 6x^2 + 9x + 3$ ;  $[-4, 0]$

Absolute minima:  $(-4, -1), (-1, -1)$   
 Absolute maxima:  $(0, 3), (-3, 3)$

4)  $y = x^4 - 3x^2 + 4$ ;  $[-1, 1]$

Absolute minima:  $(-1, 2), (1, 2)$   
 Absolute maximum:  $(0, 4)$

5)  $y = \frac{x^2}{3x - 6}$ ;  $[3, 6]$

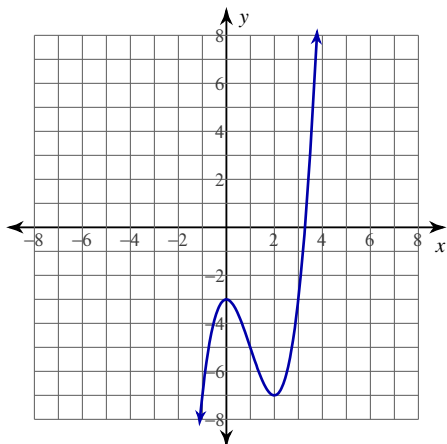
Absolute minimum:  $(4, \frac{8}{3})$   
 Absolute maxima:  $(3, 3), (6, 3)$

6)  $y = (x + 2)^{\frac{2}{3}}$ ;  $[-4, -2]$

Absolute minimum:  $(-2, 0)$   
 Absolute maximum:  $(-4, \sqrt[3]{4})$

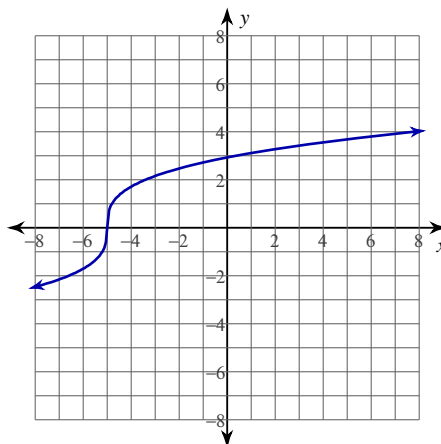
For each problem, find all points of absolute minima and maxima on the given interval.

7)  $y = x^3 - 3x^2 - 3$ ;  $(0, 3)$



Absolute minimum:  $(2, -7)$   
No absolute maxima.

8)  $y = (5x + 25)^{\frac{1}{3}}$ ;  $[-2, 2]$



Absolute minimum:  $(-2, \sqrt[3]{15})$   
Absolute maximum:  $(2, \sqrt[3]{35})$

9)  $y = x^3 - 3x^2 + 6$ ;  $[0, \infty)$

Absolute minimum:  $(2, 2)$   
No absolute maxima.

10)  $y = x^4 - 2x^2 - 3$ ;  $(0, \infty)$

Absolute minimum:  $(1, -4)$   
No absolute maxima.

11)  $y = \frac{4}{x^2 + 2}$ ;  $(-5, -2]$

No absolute minima.  
Absolute maximum:  $(-2, \frac{2}{3})$

12)  $y = -\frac{1}{6}(x + 1)^{\frac{7}{3}} + \frac{14}{3}(x + 1)^{\frac{1}{3}}$ ;  $(-5, 0)$

Absolute minimum:  $(-3, -4\sqrt[3]{2})$   
No absolute maxima.

## Finding Increasing and Decreasing Intervals

© 2013 Kuta Software LLC. All rights reserved.

**For each problem, find the open intervals where the function is increasing and decreasing.**

1)  $y = -\frac{1}{5}(x+4)^{\frac{5}{3}} + 2(x+4)^{\frac{2}{3}} - 1$

2)  $f(x) = -\frac{2x}{x-1}$

3)  $y = -\frac{3x}{x+2}$

4)  $y = -x^2$

5)  $f(x) = \csc(x); [-\pi, \pi]$

6)  $f(x) = 2x^2 - 4x + 4$

7)  $f(x) = -x^5 + 3x^3$

8)  $f(x) = -(6x+6)^{\frac{1}{2}}$

9)  $y = -x^5 + 3x^3 + 1$

10)  $y = x^4 + 4x^3 + 2x^2 - 4x - 5$

11)  $y = -x^5 + 2x^3 + 3$

12)  $f(x) = -(3x-9)^{\frac{1}{3}}$

13)  $y = x^2 + 4x - 2$

14)  $y = -\frac{1}{6}(x-2)^{\frac{7}{3}} + \frac{14}{3}(x-2)^{\frac{1}{3}} - 2$

15)  $y = 2\csc(2x); [-\pi, \pi]$

16)  $y = (3x+12)^{\frac{1}{2}}$

17)  $f(x) = \frac{1}{6}(x-1)^{\frac{7}{3}} - \frac{14}{3}(x-1)^{\frac{1}{3}}$

18)  $f(x) = x^4 - 4x^2 - 2$

19)  $y = x^3 + 5x^2 + 3x - 7$

20)  $f(x) = -\frac{x^2}{2} - 2x + 4$

## Answers to Finding Increasing and Decreasing Intervals

- 1) Increasing:  $(-4, 0)$  Decreasing:  $(-\infty, -4), (0, \infty)$
- 2) Increasing:  $(-\infty, 1), (1, \infty)$  Decreasing: No intervals exist.
- 3) Increasing: No intervals exist. Decreasing:  $(-\infty, -2), (-2, \infty)$
- 4) Increasing:  $(-\infty, 0)$  Decreasing:  $(0, \infty)$
- 5) Increasing:  $(-\pi, -\frac{\pi}{2}), (\frac{\pi}{2}, \pi)$  Decreasing:  $(-\frac{\pi}{2}, 0), (0, \frac{\pi}{2})$
- 6) Increasing:  $(1, \infty)$  Decreasing:  $(-\infty, 1)$
- 7) Increasing:  $(-\frac{3\sqrt{5}}{5}, \frac{3\sqrt{5}}{5})$  Decreasing:  $(-\infty, -\frac{3\sqrt{5}}{5}), (\frac{3\sqrt{5}}{5}, \infty)$
- 8) Increasing: No intervals exist. Decreasing:  $(-1, \infty)$
- 9) Increasing:  $(-\frac{3\sqrt{5}}{5}, \frac{3\sqrt{5}}{5})$  Decreasing:  $(-\infty, -\frac{3\sqrt{5}}{5}), (\frac{3\sqrt{5}}{5}, \infty)$
- 10) Increasing:  $(-1 - \sqrt{2}, -1), (-1 + \sqrt{2}, \infty)$  Decreasing:  $(-\infty, -1 - \sqrt{2}), (-1, -1 + \sqrt{2})$
- 11) Increasing:  $(-\frac{\sqrt{30}}{5}, \frac{\sqrt{30}}{5})$  Decreasing:  $(-\infty, -\frac{\sqrt{30}}{5}), (\frac{\sqrt{30}}{5}, \infty)$
- 12) Increasing: No intervals exist. Decreasing:  $(-\infty, \infty)$  13) Increasing:  $(-2, \infty)$  Decreasing:  $(-\infty, -2)$
- 14) Increasing:  $(0, 4)$  Decreasing:  $(-\infty, 0), (4, \infty)$
- 15) Increasing:  $(-\frac{3\pi}{4}, -\frac{\pi}{2}), (-\frac{\pi}{2}, -\frac{\pi}{4}), (\frac{\pi}{4}, \frac{\pi}{2}), (\frac{\pi}{2}, \frac{3\pi}{4})$  Decreasing:  $(-\pi, -\frac{3\pi}{4}), (-\frac{\pi}{4}, 0), (0, \frac{\pi}{4}), (\frac{3\pi}{4}, \pi)$
- 16) Increasing:  $(-4, \infty)$  Decreasing: No intervals exist. 17) Increasing:  $(-\infty, -1), (3, \infty)$  Decreasing:  $(-1, 3)$
- 18) Increasing:  $(-\sqrt{2}, 0), (\sqrt{2}, \infty)$  Decreasing:  $(-\infty, -\sqrt{2}), (0, \sqrt{2})$
- 19) Increasing:  $(-\infty, -3), (-\frac{1}{3}, \infty)$  Decreasing:  $(-3, -\frac{1}{3})$
- 20) Increasing:  $(-\infty, -2)$  Decreasing:  $(-2, \infty)$

Worksheet for Week 3: Graphs of  $f(x)$  and  $f'(x)$ 

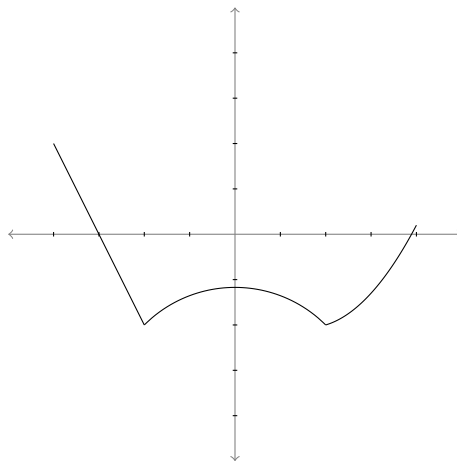
In this worksheet you'll practice getting information about a derivative from the graph of a function, and vice versa. At the end, you'll match some graphs of functions to graphs of their derivatives.

If  $f(x)$  is a function, then remember that we define

$$f'(x) = \lim_{h \rightarrow 0} \frac{f(x+h) - f(x)}{h}.$$

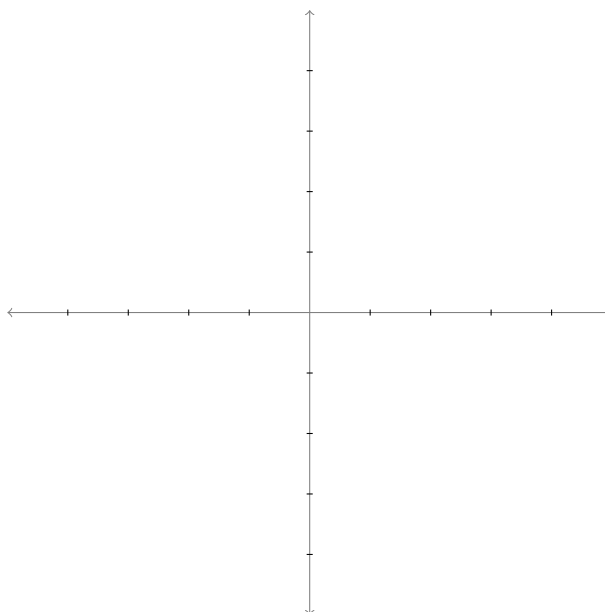
If this limit exists, then  $f'(x)$  is the slope of the tangent line to the graph of  $f$  at the point  $(x, f(x))$ .

Consider the graph of  $f(x)$  below:



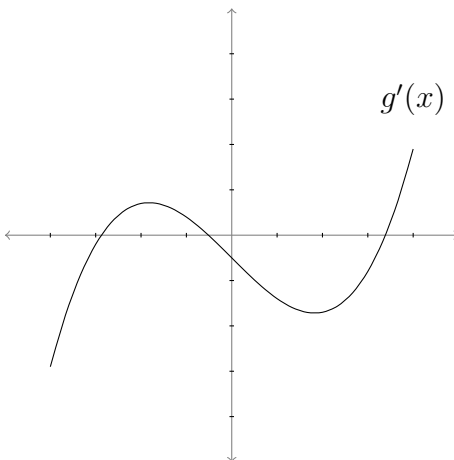
- Use the graph to answer the following questions.
  - Are there any values  $x$  for which the derivative  $f'(x)$  does *not* exist?
  - Are there any values  $x$  for which  $f'(x) = 0$ ?

- (c) This particular function  $f$  has an interval on which its derivative  $f'(x)$  is constant. What is this interval? What does the derivative function look like there? Estimate the slope of  $f(x)$  on that interval.
- (d) On which interval or intervals is  $f'(x)$  positive?
- (e) On which interval or intervals is  $f'(x)$  negative? Again, sketch a graph of the derivative on those intervals.
- (f) Now use all your answers to the questions to sketch a graph of the derivative function  $f'(x)$  on the coordinate plane below.





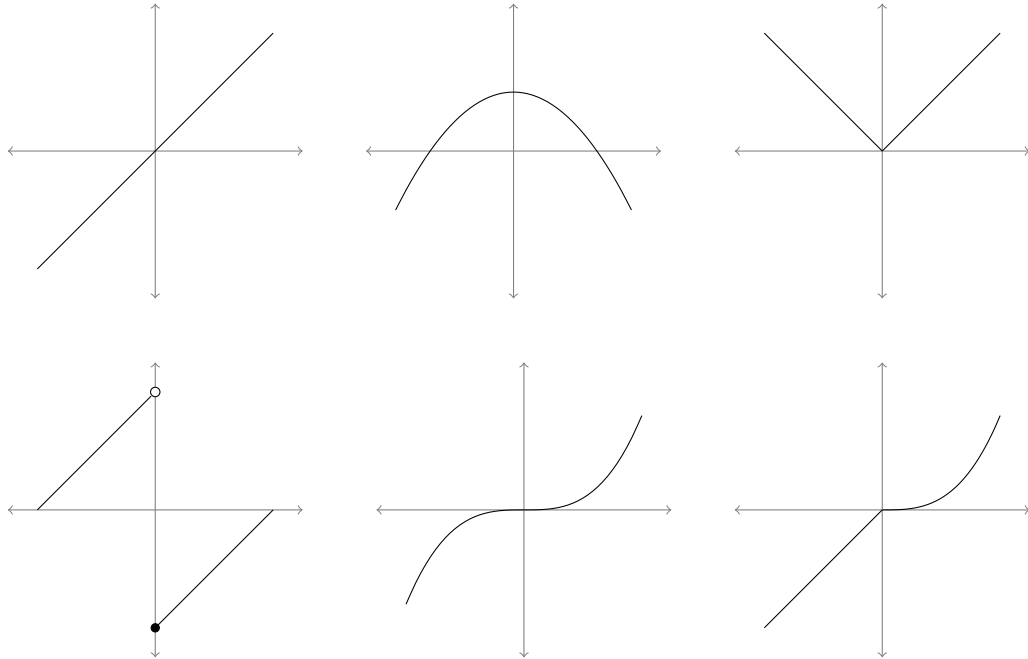
2. Below is a graph of a derivative  $g'(x)$ . Assume this is the entire graph of  $g'(x)$ . Use the graph to answer the following questions about the original function  $g(x)$ .



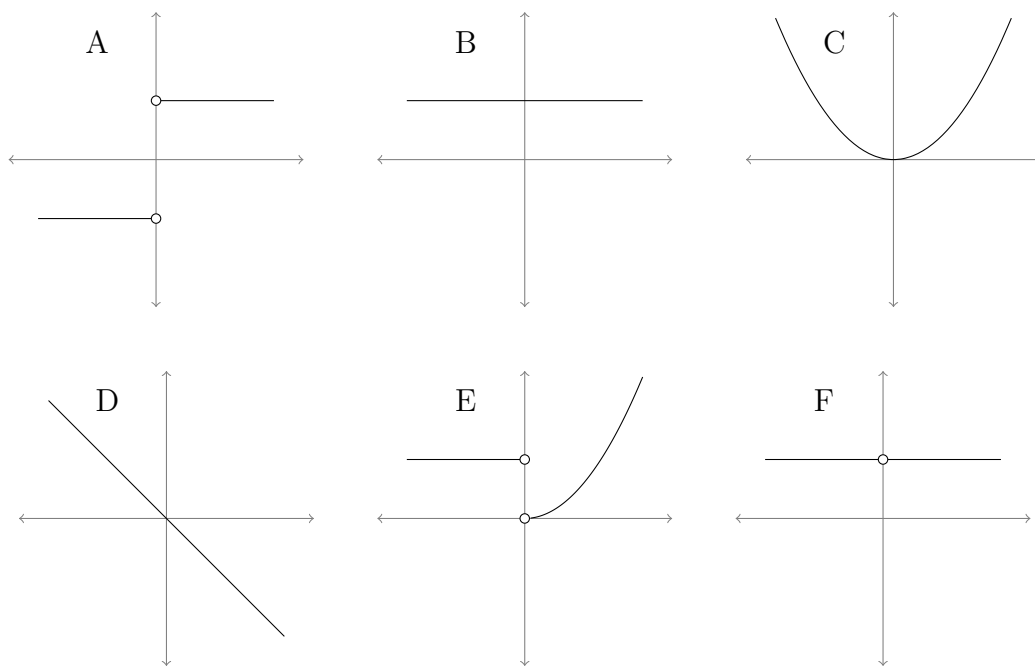
- (a) On which interval or intervals is the original function  $g(x)$  increasing?
- (b) On which interval or intervals is the original function  $g(x)$  decreasing?
- (c) Now suppose  $g(0) = 0$ . Is the function  $g(x)$  ever positive? That is, is there any  $x$  so that  $g(x) \geq 0$ ? How do you know?

3. Six graphs of functions are below, along with six graphs of derivatives. Match the graph of each function with the graph of its derivative.

Original Functions:



Their derivatives:



## Basic Integration Problems

I. Find the following integrals.

1.  $\int(5x^2 - 8x + 5)dx$

2.  $\int(-6x^3 + 9x^2 + 4x - 3)dx$

3.  $\int(x^{\frac{3}{2}} + 2x + 3)dx$

4.  $\int\left(\frac{8}{x} - \frac{5}{x^2} + \frac{6}{x^3}\right)dx$

5.  $\int\left(\sqrt{x} + \frac{1}{3\sqrt{x}}\right)dx$

6.  $\int(12x^{\frac{3}{4}} - 9x^{\frac{5}{3}})dx$

7.  $\int\frac{x^2 + 4}{x^2}dx$

8.  $\int\frac{1}{x\sqrt{x}}dx$

9.  $\int(1 + 3t)t^2 dt$

10.  $\int(2t^2 - 1)^2 dt$

11.  $\int y^2 \sqrt[3]{y} dy$

12.  $\int d\theta$

13.  $\int 7 \sin(x) dx$

14.  $\int 5 \cos(\theta) d\theta$

15.  $\int 9 \sin(3x) dx$

16.  $\int 12 \cos(4\theta) d\theta$

17.  $\int 7 \cos(5x) dx$

18.  $\int 4 \sin\left(\frac{x}{3}\right) dx$

19.  $\int 4e^{-7x} dx$

20.  $\int 9e^{\frac{x}{4}} dx$

21.  $\int -5 \cos \pi x dx$

22.  $\int -13e^{6t} dt$

II. Evaluate the following definite integrals.

1.  $\int_1^4 (5x^2 - 8x + 5) dx$

2.  $\int_1^9 (x^{\frac{3}{2}} + 2x + 3) dx$

3.  $\int_4^9 (\sqrt{x} + \frac{1}{3\sqrt{x}}) dx$

4.  $\int_1^4 \frac{5}{x^3} dx$

5.  $\int_{-1}^2 (1 + 3t)t^2 dt$

6.  $\int_{-2}^1 (2t^2 - 1)^2 dt$

## Solutions

I. Find the following integrals.

$$1. \int (5x^2 - 8x + 5) dx = \boxed{\frac{5x^3}{3} - 4x^2 + 5x + C}$$

$$2. \int (-6x^3 + 9x^2 + 4x - 3) dx = \boxed{\frac{-3x^4}{2} + 3x^3 + 2x^2 - 3x + C}$$

$$3. \int (x^{\frac{3}{2}} + 2x + 3) dx = \boxed{\frac{2x^{\frac{5}{2}}}{5} + x^2 + 3x + C}$$

$$4. \int \left( \frac{8}{x} - \frac{5}{x^2} + \frac{6}{x^3} \right) dx = \int \left( \frac{8}{x} - 5x^{-2} + 6x^{-3} \right) dx$$
$$= 8\ln(x) - \frac{5x^{-1}}{-1} + \frac{6x^{-2}}{-2} = \boxed{8\ln(x) + \frac{5}{x} - \frac{3}{x^2} + C}$$

$$5. \int \left( \sqrt{x} + \frac{1}{3\sqrt{x}} \right) dx = \int \left( x^{\frac{1}{2}} + \frac{1}{3} x^{-\frac{1}{2}} \right) dx$$
$$= \frac{x^{\frac{3}{2}}}{\frac{3}{2}} + \frac{1}{3} \frac{x^{\frac{1}{2}}}{\frac{1}{2}} = \boxed{\frac{2}{3} x^{\frac{3}{2}} + \frac{2}{3} x^{\frac{1}{2}} + C}$$

$$6. \int (12x^{\frac{3}{4}} - 9x^{\frac{5}{3}}) dx = \boxed{\frac{48x^{\frac{7}{4}}}{7} - \frac{27x^{\frac{8}{3}}}{8} + c}$$

$$7. \int \frac{x^2 + 4}{x^2} dx = \int 1 + 4x^{-2} dx = \boxed{x - \frac{4}{x} + C}$$

$$8. \int \frac{1}{x\sqrt{x}} dx = \int x^{-\frac{3}{2}} dx = \boxed{-\frac{2}{\sqrt{x}} + C}$$

$$9. \int (1 + 3t)t^2 dt = \int t^2 + 3t^3 dt = \boxed{\frac{t^3}{3} + \frac{3t^4}{4} + C}$$

$$10. \int (2t^2 - 1)^2 dt = \int 4t^4 - 4t^2 + 1 dt = \boxed{\frac{4t^5}{5} - \frac{4t^3}{3} + t + C}$$

$$11. \int y^2 \sqrt[3]{y} dy = \int y^{\frac{7}{3}} dy = \frac{3y^{\frac{10}{3}}}{10} + C$$

$$12. \int d\theta = \theta + C$$

$$13. \int 7 \sin(x) dx = -7 \cos(x) + C$$

$$14. \int 5 \cos(\theta) d\theta = 5 \sin(\theta) + C$$

$$15. \int 9 \sin(3x) dx = -3 \cos(3x) + C$$

$$16. \int 12 \cos(4\theta) d\theta = 3 \sin 4\theta + C$$

$$17. \int 7 \cos(5x) dx = \frac{7 \sin(5x)}{5} + C$$

$$18. \int 4 \sin\left(\frac{x}{3}\right) dx = -12 \cos\left(\frac{x}{3}\right) + C$$

$$19. \int 4e^{-7x} dx = -\frac{4e^{-7x}}{7} + C$$

$$20. \int 9e^{\frac{x}{4}} dx = 36e^{\frac{x}{4}} + C$$

$$21. \int -5 \cos \pi x dx = -\frac{5 \sin(\pi x)}{\pi} + C$$

$$22. \int -13e^{6t} dt = -\frac{13e^{6t}}{6} + C$$

II. Evaluate the following definite integrals.

$$1. \int_1^4 (5x^2 - 8x + 5) dx = \left( \frac{5x^3}{3} - 4x^2 + 5x \right) \Big|_1^4 = \frac{188}{3} - \frac{8}{3} = \boxed{60}$$

$$2. \int_1^9 (x^{\frac{5}{2}} + 2x + 3) dx = \left( \frac{2x^{\frac{7}{2}}}{5} + x^2 + 3x \right) \Big|_1^9 = \frac{1026}{5} - \frac{22}{5} = \frac{1001}{5} = 200.2$$

$$3. \int_4^9 \left( \sqrt{x} + \frac{1}{3\sqrt{x}} \right) dx = \left( \frac{2}{3} x^{\frac{3}{2}} + \frac{2}{3} x^{\frac{1}{2}} \right) \Big|_4^9 = 20 - \frac{20}{3} = \frac{40}{3} = 13.333$$

$$4. \int_1^4 \frac{5}{x^3} dx = -\frac{5}{2x^2} \Big|_1^4 = -\frac{5}{32} + \frac{5}{2} = \frac{75}{32} = 2.344$$

$$5. \int_{-1}^2 (1 + 3t)t^2 dt = \left( \frac{t^3}{3} + \frac{3t^4}{4} \right) \Big|_{-1}^2 = \frac{44}{3} - \frac{5}{12} = \frac{57}{4} = 14.25$$

$$6. \int_{-2}^1 (2t^2 - 1)^2 dt = \left( \frac{4t^5}{5} - \frac{4t^3}{3} + t \right) \Big|_{-2}^1 = \frac{7}{15} + \frac{254}{15} = \frac{87}{5} = 17.4$$

## Fundamental Theorem of Calculus

For each problem, find  $F'(x)$ .

1)  $F(x) = \int_{-4}^x (t-1) dt$

2)  $F(x) = \int_{-3}^x (t^2 + 2t + 3) dt$

3)  $F(x) = \int_{-1}^{x^2} (-2t + 2) dt$

4)  $F(x) = \int_4^{3x} (-t^3 + 11t^2 - 39t + 44) dt$

5)  $F(x) = \int_2^{x^3} \frac{1}{t^3} dt$

6)  $F(x) = \int_x^{x^2} (-2t - 2) dt$

7)  $F(x) = \int_x^{x^2} (t^2 - 8t + 11) dt$

8)  $F(x) = \int_x^{2x} \frac{2}{t} dt$

## Fundamental Theorem of Calculus

For each problem, find  $F'(x)$ .

$$1) F(x) = \int_{-4}^x (t-1) dt$$

$$F'(x) = x - 1$$

$$2) F(x) = \int_{-3}^x (t^2 + 2t + 3) dt$$

$$F'(x) = x^2 + 2x + 3$$

$$3) F(x) = \int_{-1}^{x^2} (-2t + 2) dt$$

$$F'(x) = -4x^3 + 4x$$

$$4) F(x) = \int_4^{3x} (-t^3 + 11t^2 - 39t + 44) dt$$

$$F'(x) = -81x^3 + 297x^2 - 351x + 132$$

$$5) F(x) = \int_2^{x^3} \frac{1}{t^3} dt$$

$$F'(x) = \frac{3}{x^7}$$

$$6) F(x) = \int_x^{x^2} (-2t - 2) dt$$

$$F'(x) = -4x^3 - 2x + 2$$

$$7) F(x) = \int_x^{x^2} (t^2 - 8t + 11) dt$$

$$F'(x) = 2x^5 - 16x^3 - x^2 + 30x - 11$$

$$8) F(x) = \int_x^{2x} \frac{2}{t} dt$$

$$F'(x) = 0$$



## Integration by Substitution

Evaluate each indefinite integral. Use the provided substitution.

1)  $\int -15x^4(-3x^5 - 1)^5 dx; u = -3x^5 - 1$

2)  $\int -16x^3(-4x^4 - 1)^{-5} dx; u = -4x^4 - 1$

3)  $\int -\frac{8x^3}{(-2x^4 + 5)^5} dx; u = -2x^4 + 5$

4)  $\int (5x^4 + 5)^{\frac{2}{3}} \cdot 20x^3 dx; u = 5x^4 + 5$

5)  $\int \frac{(5 + \ln x)^5}{x} dx; u = 5 + \ln x$

6)  $\int 4\sec 4x \cdot \tan 4x \cdot \sec^4 4x dx; u = \sec 4x$

7)  $\int 36x^3(3x^4 + 3)^5 dx; u = 3x^4 + 3$

8)  $\int x(4x - 1)^4 dx; u = 4x - 1$

**Evaluate each indefinite integral.**

$$9) \int -9x^2(-3x^3 + 1)^3 dx$$

$$10) \int 12x^3(3x^4 + 4)^4 dx$$

$$11) \int -12x^2(-4x^3 + 2)^{-3} dx$$

$$12) \int (3x^5 - 3)^{\frac{3}{5}} \cdot 15x^4 dx$$

$$13) \int (-2x^4 - 4)^4 \cdot -32x^3 dx$$

$$14) \int (e^{4x} - 4)^{\frac{1}{5}} \cdot 8e^{4x} dx$$

$$15) \int x(4x + 5)^3 dx$$

$$16) \int 5x\sqrt{2x + 3} dx$$

## Integration by Substitution

Evaluate each indefinite integral. Use the provided substitution.

$$1) \int -15x^4(-3x^5 - 1)^5 dx; u = -3x^5 - 1$$

$$\frac{1}{6}(-3x^5 - 1)^6 + C$$

$$2) \int -16x^3(-4x^4 - 1)^{-5} dx; u = -4x^4 - 1$$

$$-\frac{1}{4(-4x^4 - 1)^4} + C$$

$$3) \int -\frac{8x^3}{(-2x^4 + 5)^5} dx; u = -2x^4 + 5$$

$$-\frac{1}{4(-2x^4 + 5)^4} + C$$

$$4) \int (5x^4 + 5)^{\frac{2}{3}} \cdot 20x^3 dx; u = 5x^4 + 5$$

$$\frac{3}{5}(5x^4 + 5)^{\frac{5}{3}} + C$$

$$5) \int \frac{(5 + \ln x)^5}{x} dx; u = 5 + \ln x$$

$$\frac{1}{6}(5 + \ln x)^6 + C$$

$$6) \int 4 \sec 4x \cdot \tan 4x \cdot \sec^4 4x dx; u = \sec 4x$$

$$\frac{1}{5} \cdot \sec^5 4x + C$$

$$7) \int 36x^3(3x^4 + 3)^5 dx; u = 3x^4 + 3$$

$$\frac{1}{2}(3x^4 + 3)^6 + C$$

$$8) \int x(4x - 1)^4 dx; u = 4x - 1$$

$$\frac{1}{96}(4x - 1)^6 + \frac{1}{80}(4x - 1)^5 + C$$

Evaluate each indefinite integral.

$$9) \int -9x^2(-3x^3 + 1)^3 dx$$

$$\frac{1}{4}(-3x^3 + 1)^4 + C$$

$$10) \int 12x^3(3x^4 + 4)^4 dx$$

$$\frac{1}{5}(3x^4 + 4)^5 + C$$

$$11) \int -12x^2(-4x^3 + 2)^{-3} dx$$

$$-\frac{1}{2(-4x^3 + 2)^2} + C$$

$$12) \int (3x^5 - 3)^{\frac{3}{5}} \cdot 15x^4 dx$$

$$\frac{5}{8}(3x^5 - 3)^{\frac{8}{5}} + C$$

$$13) \int (-2x^4 - 4)^4 \cdot -32x^3 dx$$

$$\frac{4}{5}(-2x^4 - 4)^5 + C$$

$$14) \int (e^{4x} - 4)^{\frac{1}{5}} \cdot 8e^{4x} dx$$

$$\frac{5}{3}(e^{4x} - 4)^{\frac{6}{5}} + C$$

$$15) \int x(4x + 5)^3 dx$$

$$\frac{1}{80}(4x + 5)^5 - \frac{5}{64}(4x + 5)^4 + C$$

$$16) \int 5x\sqrt{2x + 3} dx$$

$$\frac{1}{2}(2x + 3)^{\frac{5}{2}} - \frac{5}{2}(2x + 3)^{\frac{3}{2}} + C$$