



BIP
LAB

ABOUT TIME

ACTIVITY CARDS



HOW TO PLAY

1. Choose any activity card.
2. Do the main activity together.
3. Do the bonus prompt 🕒 on the bottom to extend learning.
4. Don't stop there – come up with more of your own questions!

Keep building number sense into every-day conversations with your child!


© Copyright 2022

Stomp 4 times!



🕒 Spin around 4 times. Clap 4 times. Put it all together to do a dance!

**Make up a dance with
2 different moves.**



Can you repeat it 2 times? 3 times?

An illustration of a person's legs in mid-jump. The legs are colored light blue and are wearing red sneakers with white laces and white soles. A small green dashed circle is positioned above the right leg, indicating the point of the jump. The entire illustration is enclosed within a dark blue irregular border, which is itself inside a larger light beige circle with a green dashed outer edge.

Jump 10 times!

⌚ How many jumps until you get tired?

Clap 20 times!



 Clap and count backwards from 20!



Clap and count by 2's!



🕒 How about by 5's? By 10's?


**Count the windows
in the house!**



 Which room has the fewest windows?



**Count the rooms
in the house!**



🕒 Which room is the biggest?

**Count the doors
in the house!**



🕒 Knock 3 times on bedroom doors and 2 times on other doors.


**Count the switches
in the house!**




⌚ How many switches turn on lights?


**Count the chairs
in the house!**




 **Sit on each as you count!**

**Count the mirrors
in the house!**



 Pick a mirror and make 5 different silly faces!

**How many shapes
do you see here?**



Spy things with these shapes around you now!

Can you spy three number
3's around you now?



🕒 You pick a number to spy!

**How many giant steps does
it take to get from your bed
to the bathroom?**



 **How many baby steps does it take?**

**How many bunny hops
does it take to get from the
kitchen table to the sink?**



 You pick a spot to hop and count to!

**This cake has two candles on
it. How many more candles
does it need to match your
age now?**




🕒 How many candles does the cake need to match mom's age?

**Whose birthday is coming
up soonest in your home?**



⌚ Is it more or less than one month away?

How many oranges do you
see here? How many apples?
How many fruit in all?



🕒 How many of your favorite fruit could you eat?

How many carrots do you
see here? How many broccoli?
How many vegetables in all?




🕒 How many of your favorite veggies could you eat?

How many cookies do
you see here? How many
would be left if I ate two?




How many cookies could you eat?

**How many shapes
do you see here?**



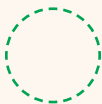
Which shape should go in the middle of this pattern?




How many shapes
do you see here?




Which shape should come next in this pattern?




**How many shapes
do you see here?**




 Which shape should come next in this pattern?

**Starting at the black dot,
count how many dots
make the caterpillar.**




🕒 Draw a caterpillar with more dots and a caterpillar with fewer dots!

**Starting at the black dot,
count how many dots
make the fish.**




Draw a fish with more dots and a fish with fewer dots!

**Who is the tallest person
in your home? Who is the
shortest?**



 Name everyone in your home from shortest to tallest!

How old is the oldest
person in your home?
What about the youngest?



What is the difference in age?

Do trees have more leaves
in the summer or winter?



summer

winter

Do trees have more leaves in summer or autumn?

**What time is your
bedtime? Is that earlier
or later than 7:00pm?**



⌚ What time should bedtime be?

What time did you get
up today? Is that earlier
or later than 8:00am?



🕒 What time is breakfast? Dinner?

How many plates do you need to set the table for everyone in your home?



How many plates do you need if 2 friends join dinner?

Is the temperature
outside higher in summer
or winter?



summer

winter

What do you think the temperature is outside now? Let's check if you are right!

**How many fingers do you
have? How many toes?
How many fingers and
toes in all?**



Do you think we should have more or fewer fingers and toes?

**Newborn lions weigh about
3 pounds. How much do you
think you weighed when you
were born?**



🕒 Did you weigh more or less than a newborn lion?

**How many socks do you
think you have? Count to
see if you are right!**



⌚ What about shoes? Do you have more socks or shoes?

**How many pants do you
think you have? Count to
see if you are right!**



⌚ What about shirts? Do you have fewer pants or shirts?

How many stuffed
animals do you think you
have? Count to see if you
are right!



Pick 2 favorites!

**How many balls do you
think you have? Count to
see if you are right!**



⌚ How many times can you bounce a ball?

**How many books do you
think you have? Count to
see if you are right!**



 Pick 2 favorite books!

**Can you find a shirt with
buttons? Count the buttons!**



⌚ Can you button 3 buttons?

How many photos of
yourself can you find?



🕒 How many other photos can you find?

Count all the blue
things you can spy!



How about red things? Did you count more blue or red things?

Count all the yellow
things you can spy!



How about green things? Did you count more yellow or green things?

**Count all the black
things you can spy!**



⌚ How about white things? Did you count more black or white things?



**Count all the round
things you can spy!**



🕒 How about square things? Did you count more round or square things?